



**LIMPOPO**  
PROVINCIAL GOVERNMENT  
REPUBLIC OF SOUTH AFRICA

**DEPARTMENT OF EDUCATION**

**NATIONAL  
SENIOR CERTIFICATE**

**GRADE 12**

**PHYSICAL SCIENCES: CHEMISTRY (P2)  
PREPARATORY EXAMINATION  
SEPTEMBER 2020**

**MARKS: 150**

**TIME: 3 hours**

**This question paper consists of 16 pages and 4 data sheets**

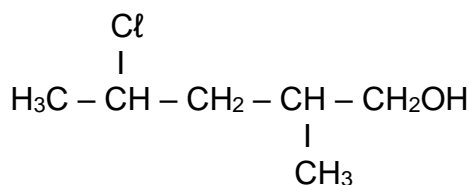
**INSTRUCTIONS AND INFORMATION**

1. Write your NAME in the appropriate space on the ANSWER BOOK.
2. This question paper consists of EIGHT questions. Answer ALL the questions in the ANSWER BOOK.
3. Start EACH question on a NEW page in the ANSWER BOOK.
4. You may use a non-programmable calculator.
5. YOU ARE ADVISED TO USE THE ATTACHED DATA SHEETS.
6. Number the answers correctly according to the numbering system used in this question paper.
7. Give brief motivations, discussions, et cetera where required.
8. Show ALL formulae and substitutions in ALL calculations.
9. Round off your final numerical answers to a minimum of TWO decimal places.
10. Write neatly and legibly.

**QUESTION 1: MULTIPLE- CHOICE QUESTIONS**

Four options are provided as possible answers to the following questions. Each question has only ONE correct answer. Write only the letter (A – D) next to the question number (1.1 – 1.10) in the ANSWER BOOK.

1.1 Consider the organic compound below.



The IUPAC name of this compound is:

- A 4-chloro-1-methyl pentan-1-ol
- B 2-chloro-4-methyl pentan-2-ol
- C 4-chloro-2-methyl pentan-1-ol
- D 2-methyl-4-chloro butan-2-ol (2)

1.2 Each of the reactions below represent a cracking reaction of  $\text{C}_{15}\text{H}_{32}$ . During which reaction are two different alkenes produced?

- A  $\text{C}_{15}\text{H}_{32} \rightarrow \text{C}_8\text{H}_{18} + \text{C}_7\text{H}_{14}$
- B  $\text{C}_{15}\text{H}_{32} \rightarrow \text{C}_2\text{H}_2 + \text{C}_5\text{H}_{10} + \text{C}_8\text{H}_{18} + \text{H}_2$
- C  $\text{C}_{15}\text{H}_{32} \rightarrow \text{C}_7\text{H}_{16} + \text{C}_8\text{H}_{16}$
- D  $\text{C}_{15}\text{H}_{32} \rightarrow 2\text{C}_2\text{H}_4 + \text{C}_3\text{H}_6 + \text{C}_8\text{H}_{18}$  (2)

1.3 The monomer of polythene is:

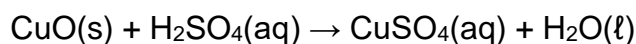
- A Ethane
- B Ethene
- C Propene
- D Poly-ethene (2)

- 1.4 Which ONE of the following combinations of values for activation energy ( $E_a$ ) and heat of reaction ( $\Delta H$ ) is possible for a reaction?

	<b>ACTIVATION ENERGY (<math>E_A</math>)</b> <b>(kJ·mol<sup>-1</sup>)</b>	<b>HEAT OF REACTION (<math>\Delta H</math>)</b> <b>(kJ·mol<sup>-1</sup>)</b>
A	100	-50
B	100	+100
C	50	+50
D	50	+100

(2)

- 1.5 Consider the reaction represented by the following chemical equation:

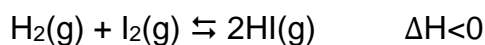


Which ONE of the following changes will have **no** influence on the rate of this reaction?

- A Decreasing the temperature.
- B Decreasing the pressure on the system.
- C Increasing the concentration of the acid.
- D Using copper oxide powder instead of copper oxide pieces.

(2)

- 1.6 The reaction which is represented by the balanced equation below, has reached equilibrium in a closed container.

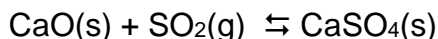


How will the equilibrium be influenced if first the volume of the container is decreased and then the temperature is increased?

- A Initially there is no change and then the reverse reaction is favoured.
- B The reverse reaction is favoured by both changes.
- C Initially there is no change and then the forward reaction is favoured.
- D Initially the reverse reaction is favoured and then the forward reaction is favoured.

(2)

1.7 Consider the equation:



If the equilibrium concentration of  $\text{SO}_2\text{(g)}$  at  $25\text{ }^\circ\text{C}$  is equal to  $x\text{ mol}\cdot\text{dm}^{-3}$ , then the value of the equilibrium constant at this temperature will be equal to:

A  $x$

B  $x^2$

C  $\frac{1}{x}$

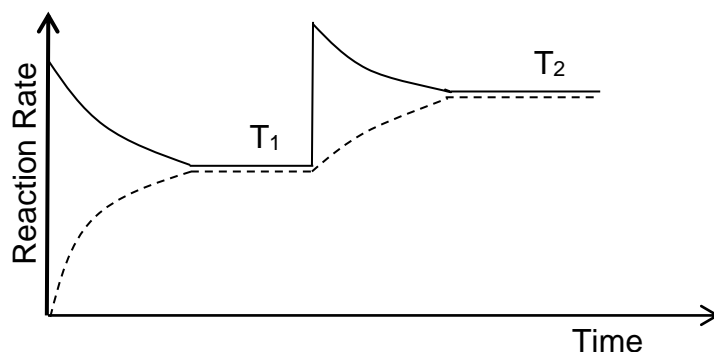
D  $\frac{1}{x^2}$

(2)

1.8 The decomposition reaction of a hypothetical compound  $\text{AX}_3\text{(g)}$ , which is represented by the following equation, reaches equilibrium in a closed container at a temperature  $T_1$ .



The temperature is increased and the system again reaches equilibrium at a temperature  $T_2$ . The change in the rates of the forward and reverse reactions are represented by the graph below.

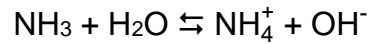


Which ONE of the following combinations regarding the forward reaction and the  $K_c$  value is correct?

	<b>The forward reaction is:</b>	<b>Change in <math>K_c</math> value</b>
A	Exothermic	$K_c$ at $T_1 < K_c$ at $T_2$
B	Exothermic	$K_c$ at $T_1 > K_c$ at $T_2$
C	Endothermic	$K_c$ at $T_1 < K_c$ at $T_2$
D	Endothermic	$K_c$ at $T_1 > K_c$ at $T_2$

(2)

1.9 Consider the following ionic reaction:



Which ONE of the following combinations represents a conjugated acid-base pair?

- A  $\text{NH}_3$  ;  $\text{NH}_4^+$
- B  $\text{NH}_3$  ;  $\text{H}_2\text{O}$
- C  $\text{H}_2\text{O}$  ;  $\text{NH}_4^+$
- D  $\text{NH}_3$  ;  $\text{OH}^-$

(2)

1.10 During a certain neutralisation reaction, 1 mole of base is used up for every 2 moles of acid. Which ONE of the following pairs can possibly be the base and the acid?

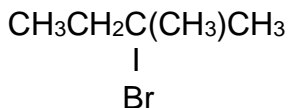
- A  $\text{NaOH}$  and  $(\text{COOH})_2$
- B  $\text{Ba}(\text{OH})_2$  and  $\text{CH}_3\text{COOH}$
- C  $\text{Na}_2\text{CO}_3$  and  $\text{H}_2\text{SO}_4$
- D  $\text{KOH}$  and  $\text{HNO}_3$

(2)

[20]

**QUESTION 2 (Start on a new page)**

2.1 Consider the condensed structural formula of a halo-alkane below.



2.1.1 Is this halo-alkane a PRIMARY, SECONDARY or TERTIARY halo-alkane?  
Give a reason for the answer. (2)

2.1.2 Write down the IUPAC name of this compound. (3)

2.1.3 Write down the IUPAC name of the MAJOR ORGANIC PRODUCT which forms when this compound undergoes an elimination reaction. (2)

2.2 The IUPAC name of an organic compound is propyl butanoate.

2.2.1 Define the term *homologous series*. (2)

2.2.2 To which homologous series does this compound belong? (1)

2.2.3 Write down the STRUCTURAL FORMULA of this compound. (2)

2.2.4 Give the IUPAC names of the organic acid and alcohol which react to form propyl butanoate. (2)

2.2.5 Write down the condensed structural formula of the functional isomer of propyl butanoate. (2)

2.3 Use MOLECULAR FORMULAE and write the balanced equation for the complete combustion of  $\text{C}_4\text{H}_{10}$ . (3)

**[19]**

**QUESTION 3 (Start on a new page)**

Compounds **A** to **E**, indicated in the table below, are used during two investigations to determine the factors which influence boiling point.

Investigation	Compound		Molecular mass (g·mol <sup>-1</sup> )	Boiling point (°C)
<b>I</b>	<b>A</b>	2,2-dimethyl propane	72	9
	<b>B</b>	2-methyl butane	72	27
	<b>C</b>	pentane	72	36
<b>II</b>	<b>D</b>	CH <sub>3</sub> CH <sub>2</sub> CH <sub>2</sub> CH <sub>2</sub> OH	74	117
	<b>E</b>	CH <sub>3</sub> CH <sub>2</sub> CH <sub>2</sub> CHO	72	75

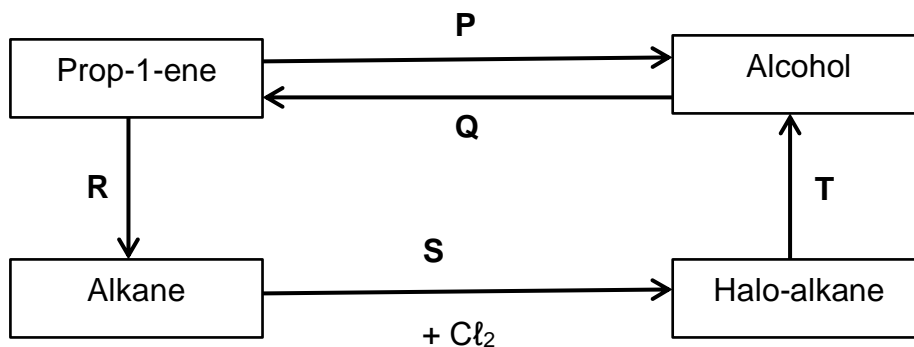
- 3.1 Compounds **A**, **B** and **C** are structural isomers. Write down the:
- 3.1.1 Definition of the term *structural isomer* (2)
- 3.1.1 GENERAL FORMULA of the homologous series to which these compounds belong (1)
- 3.1.2 Type of structural isomerism illustrated by these compounds (1)
- 3.2 Consider the boiling points of the compounds in investigation **I**.
- 3.2.1 Define the term *boiling point*. (2)
- 3.2.2 Write down the independent variable for this investigation. (1)
- 3.2.3 Write down one control variable for this investigation. (1)
- 3.2.4 Explain fully why the boiling points increase from compound **A** to compound **C**. (3)
- 3.2.5 Which one of compounds **A** or **C** will have the highest vapour pressure at a certain temperature?  
Refer to the data in the table and give a reason for the answer. (2)
- 3.3 To which homologous series does compound **E** belong? (1)
- 3.4 Consider investigation **II**. Refer to the type of Van Der Waals forces in each of the compounds and explain why the boiling point of compound **D** is higher than that of compound **E**. (3)

**[17]**



**QUESTION 4 (Start on a new page)**

In the flow diagram below, prop-1-ene is used as a starting compound for the preparation of other organic compounds. **P** to **T** represent chemical reactions.



4.1 Name the type of reaction represented by:

4.1.1 **P** (1)

4.1.2 **S** (1)

4.1.3 **Q** (1)

4.1.4 **T** (1)

4.2 For reaction **P**, write down the:

4.2.1 FORMULA of a suitable catalyst (1)

4.2.2 Structural formula of the alcohol that is formed (2)

4.2.3 IUPAC-name of this alcohol (2)

4.3 For reaction **R**, write down:

4.3.1 The type of addition reaction (1)

4.3.2 A balanced equation using structural formula (3)

4.4 During reaction **T**, the halo-alkane reacts in the presence of a base to form the alcohol in QUESTION 4.2.2. Write down the:

4.4.1 IUPAC name of the halo-alkane (2)

4.4.2 NAME of a suitable base (1)

4.4.3 TWO reaction conditions for this reaction (2)

**[18]**

**QUESTION 5 (Start on a new page)**

5.1 A reaction takes place in a test tube and the test tube becomes cold. (1)

5.1.1 In terms of energy change, name the type of reaction which occurs. (1)

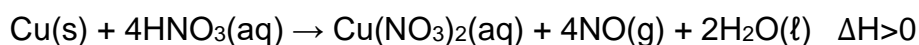
5.1.2 Give a reason for the answer to QUESTION 5.1.1. (1)

5.2 A learner wants to investigate the rate of a reaction. She places a glass beaker filled with nitric acid on a very sensitive scale in a fume cupboard. She adds a few pieces of copper to the beaker. The mass of the beaker and its contents are measured every 15 s from the instant that the copper is added to the beaker until the copper has been used up.

The following results are obtained.

Time (s)	Mass of the beaker and contents (g)	Decrease in mass (g)
0	114,6	0,0
15	114,0	0,6
30	112,4	2,2
45	110,4	4,2
60	109,4	5,2
75	108,7	5,9
90	108,4	6,2
105	108,3	6,3
120	108,3	6,3
135	108,3	6,3
150	108,3	6,3

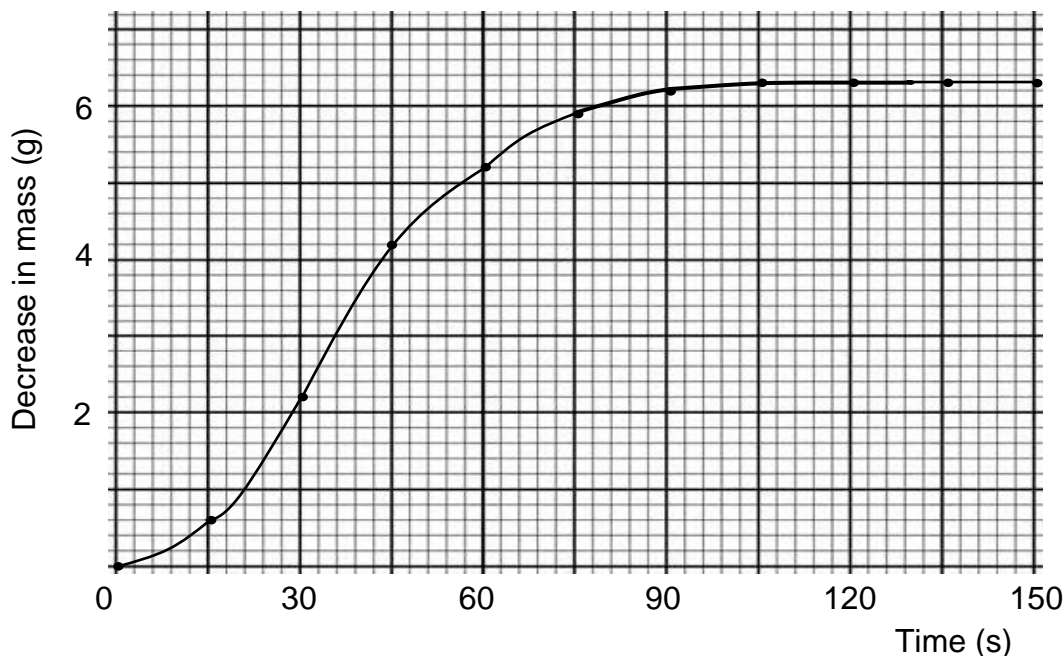
The reaction which occurs are represented by the following reaction:



5.2.1 Give a reason why the mass of the beaker and its contents DECREASES. (1)

5.2.2 Use the values in the table and calculate the average rate of the reaction in  $\text{g}\cdot\text{s}^{-1}$  for the total duration of the reaction. (3)

Study the graph below which shows decrease in mass against time.



- 5.2.3 Give a reason for the shape of the graph from 105 s to 120 s. (1)
- 5.2.4 Give a reason why the rate of the reaction INCREASES from 0 s to 30 s. (1)
- 5.2.5 Give a reason why the rate of the reaction DECREASES from 45 s to 105 s. (1)
- 5.2.6 Use the collision theory to explain the answer to QUESTION 5.2.5. (2)
- 5.2.7 Calculate the mass of copper used during this reaction. (4)
- 5.2.8 Except for adding a catalyst, name THREE other changes which can be made in order to INCREASE the rate of this reaction. (3)

- 5.3 Another learner adds  $100 \text{ cm}^3$   $\text{HCl}$  of concentration  $0,25 \text{ mol}\cdot\text{dm}^{-3}$  to an excess of  $\text{Na}_2\text{S}_2\text{O}_3(\text{aq})$  and  $0,24 \text{ g}$  of sulphur is deposited. The equation for the reaction is:

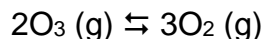


Calculate the PERCENTAGE YIELD of sulphur.

(6)  
[25]

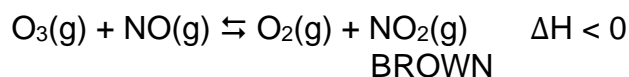
**QUESTION 6 (Start on a new page)**

Consider the following equation for the decomposition of ozone (O<sub>3</sub>).



- 6.1 State *Le Chatelier's principle*. (2)
- 6.2 Use Le Chatelier's principle and explain how an increase in pressure will influence the amount of ozone at equilibrium. (3)
- 6.3 An increase in the temperature causes a decrease in the amount of oxygen.
- 6.3.1 Which reaction is favoured by the increase of temperature? Choose from FORWARDS or BACKWARDS. (1)
- 6.3.2 Is the forward reaction ENDOTHERMIC or EXOTHERMIC? (1)
- 6.3.3 What will happen to the value of the equilibrium constant? Choose from INCREASES, DECREASES or REMAINS THE SAME. (1)
- 6.4 Define the term *catalyst*. (2)
- 6.5 Explain how the addition of a suitable catalyst will influence the amount of oxygen at equilibrium. (2)

Ozone (O<sub>3</sub>) reacts with nitrogen oxide (NO) as indicated in the reaction below.



Note that O<sub>3</sub>, NO and O<sub>2</sub> are all colourless gases while NO<sub>2</sub> is a brown gas. The colour of the gas mixture is light brown.

- 6.6 A mixture of the four gases is prepared in a 2 dm<sup>3</sup> sealed container with the following initial concentrations:

$$[\text{O}_3] = 0,6 \text{ mol}\cdot\text{dm}^{-3} \quad [\text{NO}] = 0,9 \text{ mol}\cdot\text{dm}^{-3}$$

$$[\text{O}_2] = 0,73 \text{ mol}\cdot\text{dm}^{-3} \quad [\text{NO}_2] = 0,55 \text{ mol}\cdot\text{dm}^{-3}$$

The mixture is then heated to 1500 K. After equilibrium is established, it is found that the concentration of NO is 0,36 mol·dm<sup>-3</sup>.

- Use the information given and calculate the value of the equilibrium constant at 1500 K. (7)

6.7 A number of changes are made to the equilibrium mixture and the mixture is allowed to reach a new equilibrium after each change.

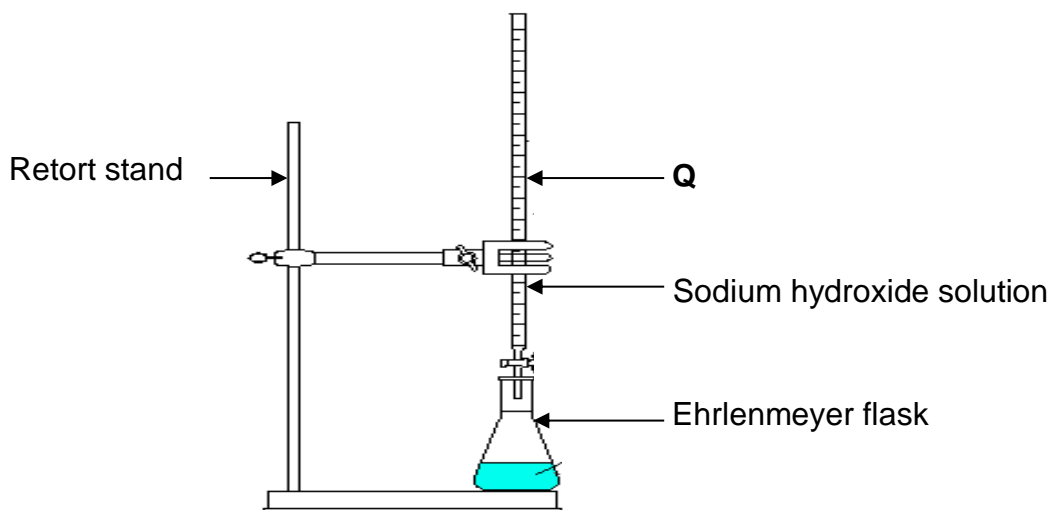
Choose from INCREASES, DECREASES or REMAINS THE SAME to answer each of the following questions.

- 6.7.1 NO gas is added to the container.  
How does the yield of NO<sub>2</sub> gas change? (1)
- 6.7.2 The pressure in the container is decreased.  
What happens to the number of moles of O<sub>3</sub>? (1)
- 6.7.3 The temperature is increased.  
What happens to the initial rate of the forward reaction? (1)
- 6.7.4 O<sub>2</sub> gas is added to the container.  
What happens to the intensity of the brown colour? (1)
- 6.7.5 Ar(g) is pumped into the container.  
What happens to the concentration of O<sub>2</sub> gas? (1)

**[24]**

**QUESTION 7 (Start on a new page)**

A learner wants to determine the percentage ethanoic acid ( $\text{CH}_3\text{COOH}$ ) in vinegar. The following apparatus is used:



7.1 Name **Q** in the above diagram.

(1)

7.2 The following indicators are available:

INDICATOR	pH-RANGE OF COLOUR CHANGE
<b>A</b>	3,1 - 4,4
<b>B</b>	6,0 - 7,6
<b>C</b>	8,3 - 10,0

Which ONE of the indicators (**A**, **B** or **C**) above is most suited to indicate the exact endpoint of this titration?

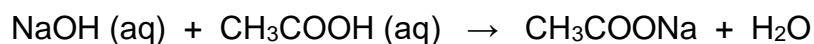
Give a reason for the answer

(2)

The learner adds 7,5 g commercial vinegar to 100 cm<sup>3</sup> of water.

25 cm<sup>3</sup> of this solution is neutralised by 28,5 cm<sup>3</sup> of a 0,11 mol·dm<sup>-3</sup> sodium hydroxide (NaOH) solution.

The balanced equation for this reaction is:



- 7.3 Ethanoic acid is a weak acid. Define a *weak acid*. (2)
- 7.4 Calculate the pH of the sodium hydroxide solution. (5)
- 7.5 Calculate the number of moles of sodium hydroxide which are used to neutralise 25 cm<sup>3</sup> of acid. (2)
- 7.6 Calculate the percentage ethanoic acid in the vinegar. (5)
- [17]**

**QUESTION 8 (Start on a new page)**

Concentrated sulphuric acid ( $\text{H}_2\text{SO}_4$ ) is added to pure water at 25 °C. The pH of the solution is 1,6.

8.1 Is sulphuric acid a MONOPROTIC or a DIPROTIC acid? (1)

8.1 Calculate the concentration of the sulphuric acid solution. (3)

8.2 Ammonium chloride crystals ( $\text{NH}_4\text{Cl}$ ) are dissolved in water and undergo hydrolysis.

8.2.1 Define the term *hydrolysis*. (2)

8.2.2 Is ammonium chloride ACIDIC or BASIC in solution?  
Explain your answer with the help of an equation. (4)

[10]

**GRAND TOTAL: 150**



DATA FOR PHYSICAL SCIENCES GRADE 12  
PAPER 2 (CHEMISTRY)

GEGEWENS VIR FISIESTE WETENSKAPPE GRAAD 12  
VRAESTEL 2 (CHEMIE)

TABLE 1: PHYSICAL CONSTANTS/TABEL 1: FISIESTE KONSTANTES

NAME/NAAM	SYMBOL/SIMBOOL	VALUE/WAARDE
Standard pressure <i>Standaarddruk</i>	$p^\theta$	$1,013 \times 10^5 \text{ Pa}$
Molar gas volume at STP <i>Molêre gasvolume by STD</i>	$V_m$	$22,4 \text{ dm}^3 \cdot \text{mol}^{-1}$
Standard temperature <i>Standaardtemperatuur</i>	$T^\theta$	273 K
Charge on electron <i>Lading op elektron</i>	$e$	$-1,6 \times 10^{-19} \text{ C}$
Avogadro's constant <i>Avogadro-konstante</i>	$N_A$	$6,02 \times 10^{23} \text{ mol}^{-1}$

TABLE 2: FORMULAE/TABEL 2: FORMULES

$n = \frac{m}{M}$	$n = \frac{N}{N_A}$
$c = \frac{n}{V}$ or/of $c = \frac{m}{MV}$	$n = \frac{V}{V_m}$
$\frac{c_a v_a}{c_b v_b} = \frac{n_a}{n_b}$	$\text{pH} = -\log[\text{H}_3\text{O}^+]$
$K_w = [\text{H}_3\text{O}^+][\text{OH}^-] = 1 \times 10^{-14} \text{ at/by } 298 \text{ K}$	
$E_{\text{cell}}^\theta = E_{\text{cathode}}^\theta - E_{\text{anode}}^\theta / E_{\text{sel}}^\theta = E_{\text{katode}}^\theta - E_{\text{anode}}^\theta$	
or/of	
$E_{\text{cell}}^\theta = E_{\text{reduction}}^\theta - E_{\text{oxidation}}^\theta / E_{\text{sel}}^\theta = E_{\text{reduksie}}^\theta - E_{\text{oksidasie}}^\theta$	
or/of	
$E_{\text{cell}}^\theta = E_{\text{oxidising agent}}^\theta - E_{\text{reducing agent}}^\theta / E_{\text{sel}}^\theta = E_{\text{oksideermi ddel}}^\theta - E_{\text{reduseermi ddel}}^\theta$	

**TABLE 3: THE PERIODIC TABLE OF ELEMENTS**  
**TABEL 3: DIE PERIODIEKE TABEL VAN ELEMENTE**

1 (I)	2 (II)	3	4	5	6	7	8	9	10	11	12	13 (III)	14 (IV)	15 (V)	16 (VI)	17 (VII)	18 (VIII)
2,1 1 H																	2 He
1,0 3 Li	1,5 4 Be											2,0 5 B	2,5 6 C	3,0 7 N	3,5 8 O	4,0 9 F	10 Ne
0,9 11 Na	1,2 12 Mg											1,5 13 Al	1,8 14 Si	2,1 15 P	2,5 16 S	3,0 17 Cl	40 18 Ar
0,8 19 K	1,0 20 Ca	1,3 21 Sc	1,5 22 Ti	1,6 23 V	1,6 24 Cr	1,5 25 Mn	1,8 26 Fe	1,8 27 Co	1,8 28 Ni	1,9 29 Cu	1,6 30 Zn	1,6 31 Ga	1,8 32 Ge	2,0 33 As	2,4 34 Se	2,8 35 Br	84 36 Kr
0,8 37 Rb	1,0 38 Sr	1,2 39 Y	1,4 40 Zr	1,6 41 Nb	1,8 42 Mo	1,9 43 Tc	2,2 44 Ru	2,2 45 Rh	2,2 46 Pd	1,9 47 Ag	1,7 48 Cd	1,7 49 In	1,8 50 Sn	1,9 51 Sb	2,1 52 Te	2,5 53 I	131 54 Xe
0,7 55 Cs	0,9 56 Ba	1,6 57 La	1,6 72 Hf	73 Ta	74 W	75 Re	76 Os	77 Ir	78 Pt	79 Au	80 Hg	1,8 81 Tl	1,8 82 Pb	1,9 83 Bi	2,0 84 Po	2,5 85 At	86 Rn
0,7 87 Fr	0,9 88 Ra	89 Ac															

**KEY/SLEUTEL**

Atomic number

29
cu
63,5

Electronegativity →

Symbol

Approximate relative atomic mass

TABLE 4A: STANDARD REDUCTION POTENTIALS  
 TABEL 4A: STANDAARDREDUKSIEPOTENSIALE

Increasing oxidising ability/Toenemende oksiderende vermoë

Half-reactions/Halfreaksies	$E^{\ominus}$ (V)
$F_2(g) + 2e^- \rightleftharpoons 2F^-$	+ 2,87
$Co^{3+} + e^- \rightleftharpoons Co^{2+}$	+ 1,81
$H_2O_2 + 2H^+ + 2e^- \rightleftharpoons 2H_2O$	+ 1,77
$MnO_4^- + 8H^+ + 5e^- \rightleftharpoons Mn^{2+} + 4H_2O$	+ 1,51
$Cl_2(g) + 2e^- \rightleftharpoons 2Cl^-$	+ 1,36
$Cr_2O_7^{2-} + 14H^+ + 6e^- \rightleftharpoons 2Cr^{3+} + 7H_2O$	+ 1,33
$O_2(g) + 4H^+ + 4e^- \rightleftharpoons 2H_2O$	+ 1,23
$MnO_2 + 4H^+ + 2e^- \rightleftharpoons Mn^{2+} + 2H_2O$	+ 1,23
$Pt^{2+} + 2e^- \rightleftharpoons Pt$	+ 1,20
$Br_2(l) + 2e^- \rightleftharpoons 2Br^-$	+ 1,07
$NO_3^- + 4H^+ + 3e^- \rightleftharpoons NO(g) + 2H_2O$	+ 0,96
$Hg^{2+} + 2e^- \rightleftharpoons Hg(l)$	+ 0,85
$Ag^+ + e^- \rightleftharpoons Ag$	+ 0,80
$NO_3^- + 2H^+ + e^- \rightleftharpoons NO_2(g) + H_2O$	+ 0,80
$Fe^{3+} + e^- \rightleftharpoons Fe^{2+}$	+ 0,77
$O_2(g) + 2H^+ + 2e^- \rightleftharpoons H_2O_2$	+ 0,68
$I_2 + 2e^- \rightleftharpoons 2I^-$	+ 0,54
$Cu^+ + e^- \rightleftharpoons Cu$	+ 0,52
$SO_2 + 4H^+ + 4e^- \rightleftharpoons S + 2H_2O$	+ 0,45
$2H_2O + O_2 + 4e^- \rightleftharpoons 4OH^-$	+ 0,40
$Cu^{2+} + 2e^- \rightleftharpoons Cu$	+ 0,34
$SO_4^{2-} + 4H^+ + 2e^- \rightleftharpoons SO_2(g) + 2H_2O$	+ 0,17
$Cu^{2+} + e^- \rightleftharpoons Cu^+$	+ 0,16
$Sn^{4+} + 2e^- \rightleftharpoons Sn^{2+}$	+ 0,15
$S + 2H^+ + 2e^- \rightleftharpoons H_2S(g)$	+ 0,14
<b><math>2H^+ + 2e^- \rightleftharpoons H_2(g)</math></b>	<b>0,00</b>
$Fe^{3+} + 3e^- \rightleftharpoons Fe$	- 0,06
$Pb^{2+} + 2e^- \rightleftharpoons Pb$	- 0,13
$Sn^{2+} + 2e^- \rightleftharpoons Sn$	- 0,14
$Ni^{2+} + 2e^- \rightleftharpoons Ni$	- 0,27
$Co^{2+} + 2e^- \rightleftharpoons Co$	- 0,28
$Cd^{2+} + 2e^- \rightleftharpoons Cd$	- 0,40
$Cr^{3+} + e^- \rightleftharpoons Cr^{2+}$	- 0,41
$Fe^{2+} + 2e^- \rightleftharpoons Fe$	- 0,44
$Cr^{3+} + 3e^- \rightleftharpoons Cr$	- 0,74
$Zn^{2+} + 2e^- \rightleftharpoons Zn$	- 0,76
$2H_2O + 2e^- \rightleftharpoons H_2(g) + 2OH^-$	- 0,83
$Cr^{2+} + 2e^- \rightleftharpoons Cr$	- 0,91
$Mn^{2+} + 2e^- \rightleftharpoons Mn$	- 1,18
$Al^{3+} + 3e^- \rightleftharpoons Al$	- 1,66
$Mg^{2+} + 2e^- \rightleftharpoons Mg$	- 2,36
$Na^+ + e^- \rightleftharpoons Na$	- 2,71
$Ca^{2+} + 2e^- \rightleftharpoons Ca$	- 2,87
$Sr^{2+} + 2e^- \rightleftharpoons Sr$	- 2,89
$Ba^{2+} + 2e^- \rightleftharpoons Ba$	- 2,90
$Cs^+ + e^- \rightleftharpoons Cs$	- 2,92
$K^+ + e^- \rightleftharpoons K$	- 2,93
$Li^+ + e^- \rightleftharpoons Li$	- 3,05

Increasing reducing ability/Toenemende reduserende vermoë

TABLE 4B: STANDARD REDUCTION POTENTIALS  
 TABEL 4B: STANDAARDREDUKSIEPOTENSIALE

Half-reactions/Halfreaksies	$E^\theta$ (V)
$\text{Li}^+ + e^- \rightleftharpoons \text{Li}$	-3,05
$\text{K}^+ + e^- \rightleftharpoons \text{K}$	-2,93
$\text{Cs}^+ + e^- \rightleftharpoons \text{Cs}$	-2,92
$\text{Ba}^{2+} + 2e^- \rightleftharpoons \text{Ba}$	-2,90
$\text{Sr}^{2+} + 2e^- \rightleftharpoons \text{Sr}$	-2,89
$\text{Ca}^{2+} + 2e^- \rightleftharpoons \text{Ca}$	-2,87
$\text{Na}^+ + e^- \rightleftharpoons \text{Na}$	-2,71
$\text{Mg}^{2+} + 2e^- \rightleftharpoons \text{Mg}$	-2,36
$\text{Al}^{3+} + 3e^- \rightleftharpoons \text{Al}$	-1,66
$\text{Mn}^{2+} + 2e^- \rightleftharpoons \text{Mn}$	-1,18
$\text{Cr}^{2+} + 2e^- \rightleftharpoons \text{Cr}$	-0,91
$2\text{H}_2\text{O} + 2e^- \rightleftharpoons \text{H}_2(\text{g}) + 2\text{OH}^-$	-0,83
$\text{Zn}^{2+} + 2e^- \rightleftharpoons \text{Zn}$	-0,76
$\text{Cr}^{3+} + 3e^- \rightleftharpoons \text{Cr}$	-0,74
$\text{Fe}^{2+} + 2e^- \rightleftharpoons \text{Fe}$	-0,44
$\text{Cr}^{3+} + e^- \rightleftharpoons \text{Cr}^{2+}$	-0,41
$\text{Cd}^{2+} + 2e^- \rightleftharpoons \text{Cd}$	-0,40
$\text{Co}^{2+} + 2e^- \rightleftharpoons \text{Co}$	-0,28
$\text{Ni}^{2+} + 2e^- \rightleftharpoons \text{Ni}$	-0,27
$\text{Sn}^{2+} + 2e^- \rightleftharpoons \text{Sn}$	-0,14
$\text{Pb}^{2+} + 2e^- \rightleftharpoons \text{Pb}$	-0,13
$\text{Fe}^{3+} + 3e^- \rightleftharpoons \text{Fe}$	-0,06
<b><math>2\text{H}^+ + 2e^- \rightleftharpoons \text{H}_2(\text{g})</math></b>	<b>0,00</b>
$\text{S} + 2\text{H}^+ + 2e^- \rightleftharpoons \text{H}_2\text{S}(\text{g})$	+0,14
$\text{Sn}^{4+} + 2e^- \rightleftharpoons \text{Sn}^{2+}$	+0,15
$\text{Cu}^{2+} + e^- \rightleftharpoons \text{Cu}^+$	+0,16
$\text{SO}_4^{2-} + 4\text{H}^+ + 2e^- \rightleftharpoons \text{SO}_2(\text{g}) + 2\text{H}_2\text{O}$	+0,17
$\text{Cu}^{2+} + 2e^- \rightleftharpoons \text{Cu}$	+0,34
$2\text{H}_2\text{O} + \text{O}_2 + 4e^- \rightleftharpoons 4\text{OH}^-$	+0,40
$\text{SO}_2 + 4\text{H}^+ + 4e^- \rightleftharpoons \text{S} + 2\text{H}_2\text{O}$	+0,45
$\text{Cu}^+ + e^- \rightleftharpoons \text{Cu}$	+0,52
$\text{I}_2 + 2e^- \rightleftharpoons 2\text{I}^-$	+0,54
$\text{O}_2(\text{g}) + 2\text{H}^+ + 2e^- \rightleftharpoons \text{H}_2\text{O}_2$	+0,68
$\text{Fe}^{3+} + e^- \rightleftharpoons \text{Fe}^{2+}$	+0,77
$\text{NO}_3^- + 2\text{H}^+ + e^- \rightleftharpoons \text{NO}_2(\text{g}) + \text{H}_2\text{O}$	+0,80
$\text{Ag}^+ + e^- \rightleftharpoons \text{Ag}$	+0,80
$\text{Hg}^{2+} + 2e^- \rightleftharpoons \text{Hg}(\ell)$	+0,85
$\text{NO}_3^- + 4\text{H}^+ + 3e^- \rightleftharpoons \text{NO}(\text{g}) + 2\text{H}_2\text{O}$	+0,96
$\text{Br}_2(\ell) + 2e^- \rightleftharpoons 2\text{Br}^-$	+1,07
$\text{Pt}^{2+} + 2e^- \rightleftharpoons \text{Pt}$	+1,20
$\text{MnO}_2 + 4\text{H}^+ + 2e^- \rightleftharpoons \text{Mn}^{2+} + 2\text{H}_2\text{O}$	+1,23
$\text{O}_2(\text{g}) + 4\text{H}^+ + 4e^- \rightleftharpoons 2\text{H}_2\text{O}$	+1,23
$\text{Cr}_2\text{O}_7^{2-} + 14\text{H}^+ + 6e^- \rightleftharpoons 2\text{Cr}^{3+} + 7\text{H}_2\text{O}$	+1,33
$\text{Cl}_2(\text{g}) + 2e^- \rightleftharpoons 2\text{Cl}^-$	+1,36
$\text{MnO}_4^- + 8\text{H}^+ + 5e^- \rightleftharpoons \text{Mn}^{2+} + 4\text{H}_2\text{O}$	+1,51
$\text{H}_2\text{O}_2 + 2\text{H}^+ + 2e^- \rightleftharpoons 2\text{H}_2\text{O}$	+1,77
$\text{Co}^{3+} + e^- \rightleftharpoons \text{Co}^{2+}$	+1,81
$\text{F}_2(\text{g}) + 2e^- \rightleftharpoons 2\text{F}^-$	+2,87

Increasing oxidising ability/Toenemende oksiderende vermoë

Increasing reducing ability/Toenemende reduserende vermoë



**LIMPOPO**  
PROVINCIAL GOVERNMENT  
REPUBLIC OF SOUTH AFRICA

**DEPARTMENT OF EDUCATION**

**NATIONAL  
SENIOR CERTIFICATE  
NASIONALE  
SENIOR SERTIFIKAAT**

**GRADE/GRAAD 12**

**PHYSICAL SCIENCES: CHEMISTRY (P2)  
FISIESE WETENSKAPPE: CHEMIE (V2)**

**SEPTEMBER 2020**

**MEMORANDUM**

**MARKS/PUNTE: 150**

**This memorandum consists of 10 pages.  
Hierdie memorandum bestaan uit 10 bladsye.**

### QUESTION 1/VRAAG 1

- |      |      |     |
|------|------|-----|
| 1.1  | C ✓✓ | (2) |
| 1.2  | D ✓✓ | (2) |
| 1.3  | B ✓✓ | (2) |
| 1.4  | A ✓✓ | (2) |
| 1.5  | B ✓✓ | (2) |
| 1.6  | A ✓✓ | (2) |
| 1.7  | C ✓✓ | (2) |
| 1.8  | C ✓✓ | (2) |
| 1.9  | A ✓✓ | (2) |
| 1.10 | B ✓✓ | (2) |

[20]

### QUESTION 2/VRAAG 2

- 2.1.1 Tertiary (halo-alkane) ✓ the carbon attached to the halogen/Br is attached to three other carbons ✓  
*Tersiêre* (haloalkaan) die koolstof waaraan die halogeen/Br verbind is, is aan drie ander koolstowwe verbind (2)

- 2.1.2 2-bromo-2-methylbutane  
*2-bromo-2-metielbutaan / 2-broom-2-metielbutaan*

**Marking criteria/Nasienriglyne**

- Butane/butaan ✓
- **Both** substituents correct : bromo **and** methyl /Altwee substituentte korrek: bromo en metiel ✓
- Everything correct / Alles reg ✓  
(Any error e.g. hyphens omitted and/or incorrect sequence:  
*Enige fout, bv. koppeltekens weggelaat en/of verkeerde volgorde: Max./Maks:  $\frac{2}{3}$* ) (3)

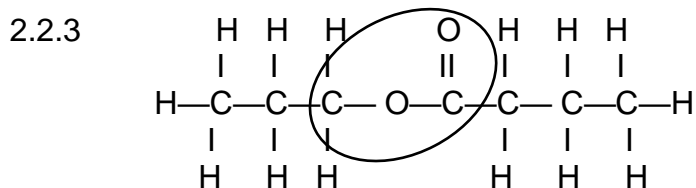
- 2.1.3 2-methyl-2-butene/ 2-methyl but-2-ene / 2-metiel-2-buteen / 2-metielbut-2-ene

**Marking criteria/Nasienriglyne**

- But-2-ene/2-butene/But-2-ene/2-buteen ✓
- 2-methyl/2-metiel ✓  
Any error e.g. hyphens omitted and/or incorrect sequence:  
*Enige fout, bv. koppeltekens weggelaat en/of verkeerde volgorde: Max./Maks:  $\frac{1}{2}$*  (2)

- 2.2.1 (A series of) organic compounds which have the same general formula OR which differ from each other by a CH<sub>2</sub> group/unit ✓✓ / 'n *Homoloë reeks* is 'n *reeks organiese verbindings wat deur dieselfde algemene formule beskryf word* **OF** waarvan die een lid van die volgende lid verskil met 'n CH<sub>2</sub>-groep. (2)

- 2.2.2 Esters ✓ (1)

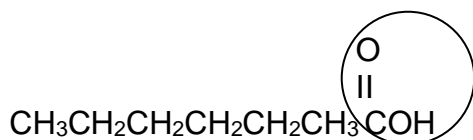


**Marking criteria/nasienriglyne**

- Functional group ✓
- Everything else correct ✓  
*funksionele groep*  
*alles verder korrek* (2)

- 2.2.4 Propanol ✓ and butanoic acid ✓ / *Propanol en butanoësuur* (2)

2.2.5



**Marking criteria/nasienriglyne**

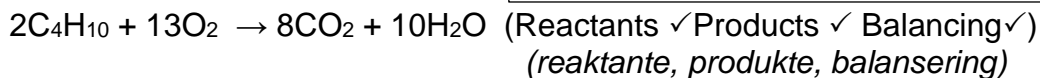
Functional group ✓

Everything else correct ✓

*funksionele groep alles verder korrek*

(2)

2.3



(3)

[19]

**QUESTION 3/VRAAG 3**

3.1.1 Organic molecules with the same molecular formula ✓ but different structural formula ✓ / (2)

*Organiese molekule met dieselfde molekulêre formule, maar verskillende struktuurformules.*

3.1.2  $\text{C}_n\text{H}_{2n+2}$  ✓ (1)

3.1.3 Chain(isomers) ✓ / *ketting(isomere)* (1)

3.2.1 The temperature ✓ at which the vapour pressure of a substance equals atmospheric/external pressure ✓

*Die temperatuur waar die dampdruk van 'n stof gelyk is aan die atmosferiese/eksterne druk*

(2)

3.2.2 number of branches ✓ / *aantal vertakkings* (1)

3.2.3 Number of C and H atoms, / molecular mass ✓  
*Aantal C en H atome, / molekulêre massa* (1)

3.2.4 **From A to C**

**(Structure)** Branching decreases/molecules become less compact/surface area increases (over which intermolecular forces acts) ✓

**(Intermolecular forces)** Stronger/more intermolecular forces/Van Der Waals forces/London forces ✓

**(Energy)** More energy needed to overcome intermolecular forces/Van Der Waals forces / London forces ✓

**Van A na C**

**(Struktuur)** *Vertakkings verminder/molekule word minder kompak/oppervlakte (waaroor intermolekulêre kragte werk) word groter*

**(Intermolekulêre kragte)** *Sterker of meer intermolekulêre kragte / Van Der Waalskragte / Londonkragte*

**{Energie}** *Meer energie benodig om intermolekulêre kragte / Van Der Waalskragte / Londonkragte te oorkom*

(3)

3.2.5 A ✓  
Lowest boiling point ✓ / *laagste kookpunt* (2)

3.3 Aldehydes ✓ / *aldehyede* (1)

3.4 D/butan-1-ol has hydrogen bonding forces between the molecules ✓  
E/butanal has dipole-dipole forces between the molecules ✓  
Hydrogen bonds are stronger than dipole-dipole forces ✓  
*D/butan-1-ol het waterstofbindings tussen die molekule*  
*E/butanaal het dipool-dipoolkragte tussen die molekule*  
*Waterstofbindings is sterker as dipool-dipool kragte* (3)

[17]

**QUESTION 4/VRAAG 4**

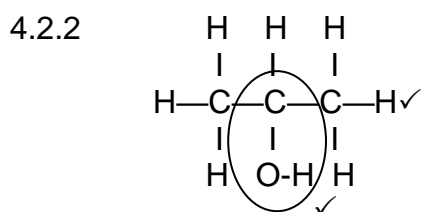
4.1.1 Addition ✓ / hydration  
*Addisie / hidrasie//hidratering* (1)

4.1.2 Substitution ✓ / halogenation/ chloronation  
*Substitusie / halogenasie//halogenering//chloronering* (1)

4.1.3 Elimination ✓ / dehydration  
*Eliminasie//dehidrasie//dehidratering* (1)

4.1.4 Substitution ✓  
*Substitusie* (1)

4.2.1  $H_2SO_4 / H_3PO_4$  ✓ (1)



**Marking criteria/nasienriglyne**

Functional group correct ✓ /  
*Funksionele groep korrek ✓*  
 Whole molecule correct ✓ / *Molekuul korrek*  
 Note: Accept OH. Line (bond) must be from C to O  
 Aanvaar OH. Lyn (binding) moet vanaf C na O wees

(2)

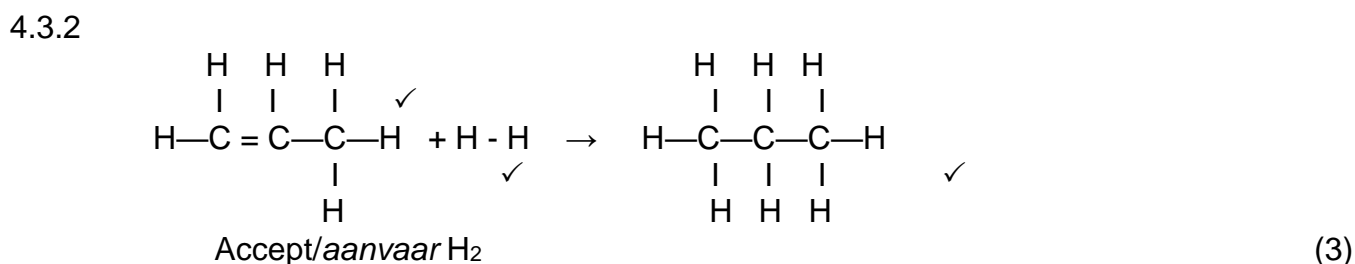
4.2.3 2°-propanol ✓ / propan-2-ol

**Marking criteria/nasienriglyne**

propanol ✓  
 Everything correct ✓ / Alles reg

(2)

4.3.1 Hydrogenation ✓ / *hidrogenasie/hidrogenering* (1)



(3)

4.4.1 2-chloro ✓ propane ✓ / *2-chloropropaan* (2)

4.4.2 Sodium hydroxide / potassium hydroxide ✓  
*Natriumhidroksied/ kaliumhidroksied* (1)

4.4.3 Dilute base OR adding of water ✓ / *verdunde basis OF byvoeging van water*  
 (Mild) heat ✓ / *(Matige) hitte* (2)

**[18]**

**QUESTION 5/VRAAG 5**

5.1.1 Endothermic reaction ✓ / *endotermiese reaksie* (1)

5.1.2 Energy is absorbed ✓✓ OR Energy is required for reaction to take place OR  
 Energy is absorbed from the surroundings  
*Energie is geabsorbeer OF Energie word benodig vir die reaksie om plaas te  
 vind OF Energie word geabsorbeer uit die omgewing.* (1)

5.2.1 NO/gas escapes ✓ OR it is not a closed system  
*NO/ gas ontsnap OF dit is nie 'n geslote sisteem nie* (1)




5.2.2 Rate/tempo =  $-\frac{\Delta m}{\Delta t}$   
 $= -\frac{6,3-0}{0-105} = 0,06 \text{ g}\cdot\text{s}^{-1} \checkmark$   
(accept/aanvaar  $-0,06 \text{ g}\cdot\text{s}^{-1}$ ) (3)

5.2.3 Reaction is completed/all Cu(reactant) is used up (NOT equilibrium)  
Reaksie is voltooi/al die Cu(reaktante) is opgebruik (NIE ewewig nie) (1)

5.2.4 Temperature increased/heat is given off /exothermic reaction  
Accept:  $\text{HNO}_3$  removes CuO from Cu surface/ cleans copper surface  
Temperatuur neem toe/ hitte word vrygestel/ eksotermiese reaksie  
Aanvaar  $\text{HNO}_3$  verwyder CuO vanaf Cu oppervlak/ maak Cu oppervlak skoon (1)

5.2.5 Concentration of  $\text{HNO}_3$  decreased/ reactants are being used up  
Konsentrasie van  $\text{HNO}_3$  neem af /reaktante opgebruik (1)

5.2.6  The number of particles has decreased. Thus fewer/less effective collisions occur per second.  
Die aantal deeltjies neem af. Minder effektiewe botsings vind per sekonde plaas. (2)

5.2.7 NO:  $n = \frac{m}{M} = \frac{6,3}{30} = 0,21 \text{ mol}$  (Accept / Aanvaar 6,2 - 6,4)  
 $n_{\text{Cu}} : n_{\text{NO}}$   
 $1 : 4 \quad \therefore \frac{0,21}{4} = 0,052 \text{ mol}$  (Using ratio / toepassing van verhouding)  
Cu:  $m = nM = 0,052 \times 63,5 = 3,30 \text{ g}$  (4)

5.2.8 Increase the concentration of  $\text{HNO}_3$   
Increase the temperature of the solution  
Use Cu powder / smaller pieces of Cu/increase the surface area of Cu  
Verhoog die konsentrasie van die  $\text{HNO}_3$   
Verhoog die temperatuur van die oplossing  
Gebruik Cu-poeier / kleiner Cu stukkies/ vergroot die reaksie oppervlak van Cu (3)

5.3

Marking guidelines/Nasienriglyne

- Substitution of/*vervanging van*:  $0,25 \times 0,1$  ✓
- Use mol ratio/*gebruik molverhouding*: 1:2 ;  $0,025:0,0125$  ✓
- Formula/*formule*:  $n = \frac{m}{M}$  ✓
- Substitute/*vervang*: 32 ✓
- Substitute/*vervang*:  $\frac{0,0075}{0,0125}$  **OR/OF**  $\frac{0,24}{0,4}$  ✓
- Final answer/*finale antwoord*: 60 % ✓

$$\begin{aligned} n &= cV \\ &= 0,25 \times 0,1 \checkmark \\ &= 0,025 \text{ mol} \end{aligned}$$

$$\begin{aligned} \text{HCl} : \text{S} \\ 2 : 1 \\ 0,025 : 0,0125 \checkmark \end{aligned}$$

Option 1/opsie 1

$$\begin{aligned} n &= \frac{m}{M} \checkmark = \frac{0,24}{32} \checkmark = 0,0075 \text{ mol} \\ \% \text{ opbrengs} &= \frac{0,0075}{0,0125} \checkmark \times 100 \\ &= 60 \% \checkmark \end{aligned}$$

Option 2/opsie 2

$$\begin{aligned} m &= nM \checkmark \\ &= 0,0125 \times 32 \checkmark \\ &= 0,4 \text{ g} \\ \% \text{ opbrengs} &= \frac{0,24}{0,4} \checkmark \times 100 \\ &= 60 \% \checkmark \end{aligned}$$

(6)  
[19]

**QUESTION 6/VRAAG 6**

- 6.1 When an external stress (change in pressure, temperature or concentration) is applied to a closed system in chemical equilibrium, ✓ the equilibrium point will change in such a way as to counteract the stress. ✓  
*Wanneer die ewewig in 'n geslote sisteem versteur word (verandering in druk, temperatuur of konsentrasie) stel die sisteem 'n nuwe ewewig in deur die reaksie wat die versteuring teëwerk te bevoordeel.* (2)
- 6.2 Reaction producing fewer moles/ less volume of gas favoured ✓  
The reverse reaction is favoured ✓  
The amount of ozone will increase ✓  
*Die reaksie wat minder gas vorm/ kleinervolume gas vorm word bevoordeel*  
*Die terugwaatse reaksie word bevoordeel*  
*Dus sal die hoeveelheid osoon vermeerder* (3)
- 6.3.1 Reverse ✓ / terugwaarts (1)
- 6.3.2 Exothermic ✓ / eksotermies (1)

6.3.3 Decreases ✓/verlaag (1)

6.4 A catalyst is a chemical substance which increases the rate of a reaction ✓ without undergoing a permanent change itself ✓ //  
*'n Katalisator is 'n chemiese stof wat die tempo van 'n chemiese reaksie verhoog sonder om self 'n permanente verandering te ondergaan.*

OR/OF

A catalyst increases the rate of a reaction ✓ by providing an alternative route with lower activation energy. ✓ //

*'n Katalisator verhoog die tempo van 'n reaksie deur 'n alternatiewe roete van laer aktiveringsenergie te verskaf.* (2)

6.5 Amount of oxygen remains the same ✓

A catalyst speeds up the rate of the forward and reverse reactions equally ✓

*Die hoeveelheid van suurstof bly dieselfde.*

*'n Katalisator verhoog die tempo van die voorwaarte en terugwaartse reaksies ewe vee* (2)

6.6 **Mark allocation/Puntetoekening**

- Substitution of 0,72 mol NO at equilibrium or 0,36 mol.dm<sup>3</sup> if using concentrations ✓ / *vervanging van 0,72 mol by ewewig of 0,36 mol·dm<sup>-3</sup> as konsentrasie gebruik word.*
- Change in NO (0,54/ 1,08) / *verandering in NO (0,54/ 1,08)* ✓
- **USING** ratio / **GEBRUIK** *verhouding*: 1:1:1 ✓
- Divide or multiply by volume / *Gedeel deur of vermenigvuldig met volume* (2 dm<sup>3</sup>) ✓
- Correct K<sub>c</sub> expression (formulae in square brackets). ✓  
*Korrekte K<sub>c</sub> -uitdrukking (formules tussen vierkanthakies).*
- Substitution of reactant and product concentrations / *Vervanging van reaktans- en produk konsentrasies.* ✓
- **Correct** final answer / **Korrekte** finale antwoord: 20,25 ✓

**Moles/mol:**

	O <sub>3</sub>	NO	O <sub>2</sub>	NO <sub>2</sub>
Initial moles <i>Aanvanklik mol</i>	0,6X2=1,2	0,9X2=1,8	0,73X2=1,46	0,55X2=1,10
Change <i>/verandering</i>	1,08	(-) <b>1,08</b> ✓	(+) 1,08	1,08
Equilibrium <i>Ewewig</i> (moles / mol)	0,12	0,36X2= <b>0,72</b> ✓	2,54	2,18
Concentration <i>Konsentrasie</i>	C=n/v =0,12/2=0,06	0,36	1,27	1,09

**Ratio**  
✓

÷2 ✓

$$K_c = \frac{[O_2][NO_2]}{[O_3][NO]} \checkmark = \frac{(1,27)(1,09)}{(0,06)(0,36)} \checkmark = 64,09 \checkmark \quad (64,0-64,2)$$

	O <sub>3</sub>	NO	O <sub>2</sub>	NO <sub>2</sub>
Initial moles <i>Aanvanklik mol</i>	0,6	0,9	0,73	0,55
Change <i>Verandering</i>	0,54	(-) <b>0,54</b> ✓	(+) 0,54	0,54
Concentration <i>Konsentrasie</i>	0,06	<b>0,36</b> ✓	1,27	1,09

ratio ✓

**Concentration/konsentrasie**

x2 ✓

$$K_c = \frac{[O_2][NO_2]}{[O_3][NO]} \checkmark = \frac{(1,27)(1,09)}{(0,06)(0,36)} \checkmark = 64,09 \checkmark \quad (64,0-64,2)$$

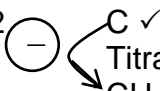
(7)

- 6.7.1 Increases ✓ / *neem toe* (1)
- 6.7.2 Remains the same ✓ / *bly dieselfde* (1)
- 6.7.3 Increases ✓ / *neem toe* (1)
- 6.7.4 Decreases ✓ / *neem af* (1)
- 6.7.5 Remains the same ✓ / *bly dieselfde* (1)

[24]

**QUESTION 7/VRAAG 7**

7.1 Burette ✓ / Buret (1)

7.2  C ✓  
 Titration of a weak acid and strong base ✓ OR  
 CH<sub>3</sub>COOH is a weak acid and NaOH a strong base  
*Titrasie van 'n swak suur en sterk basis OF*  
*CH<sub>3</sub>COOH is 'n swak suur en NaOH 'n sterk basis.* (2)

7.3 Weak acids ionizes incompletely in water ✓ to form a low concentration of H<sub>3</sub>O<sup>+</sup> ions. ✓  
*Swak sure ioniseer onvolledig in water om 'n lae konsentrasie H<sub>3</sub>O<sup>+</sup>-ione te vorm* (2)

7.4 NaOH → Na<sup>+</sup>(aq) + OH<sup>-</sup>(aq)  
 [OH<sup>-</sup>] = 0,11 mol·dm<sup>-3</sup> ✓  
 K<sub>w</sub> = 1 × 10<sup>-14</sup> = [H<sub>3</sub>O<sup>+</sup>][OH<sup>-</sup>] ✓  
 1 × 10<sup>-14</sup> = [H<sub>3</sub>O<sup>+</sup>](0,11) ✓  
 [H<sub>3</sub>O<sup>+</sup>] = 9,09 × 10<sup>-14</sup> ✓  
 pH = -log[H<sub>3</sub>O<sup>+</sup>] ✓  
 = -log(9,09 × 10<sup>-14</sup>)  
 = 13,04 ✓  
 OR  
 [OH<sup>-</sup>] = 0,11 mol·dm<sup>-3</sup> ✓  
 pOH = -log[OH<sup>-</sup>] ✓  
 = -log 0,11  
 = 0,06 ✓  
 pH = 14 - pOH ✓ = 14 - 0,06 = 13,04 ✓ (5)

7.5 n = c × V  
 = 0,11 × 0,0285 ✓  
 = 0,0031 mol ✓ (0,003135) (2)

7.6 **Positive marking from QUESTION 7.5/ Positiewe nasien vanaf VRAAG 7.5**  
 n<sub>acid/suur</sub> : n<sub>base/basis</sub> = 1:1  
 n<sub>acid/suur</sub> = 0,0031 mol ✓  
 m<sub>acid/suur</sub> in 25 cm<sup>3</sup> = n × M = 0,0031 × 60 = 0,186g ✓  
 m<sub>acid/suur</sub> in 100 cm<sup>3</sup> = 0,186 × 4 ✓ = 0,744g  
 % etanoic acid/ etanoësuur =  $\frac{0,744}{7,5}$  ✓ × 100 = 9,9 % ✓ (9,8 - 10) (5)

[17]

**QUESTION 8/VRAAG 8**

8.1 Diprotic ✓/Diproties (1)

8.2  $\text{pH} = -\log[\text{H}_3\text{O}^+]$   
 $1,6 = -\log[\text{H}_3\text{O}^+]$  ✓  
 $[\text{H}_3\text{O}^+] = 0,025$  ✓  
 $[\text{H}_2\text{SO}_4] = 0,0125 \text{ mol}\cdot\text{dm}^{-3}$  ✓ (3)

8.3.1 Reaction of a salt with water ✓✓ / Die reaksie van 'n sout met water (2)

8.3.2 Acidic ✓/ Suur  
 $\text{NH}_4^+(\text{aq}) + \text{H}_2\text{O} \rightarrow \text{NH}_3 + \text{H}_3\text{O}^+(\text{aq})$  ✓  
 $[\text{H}_3\text{O}^+]$  increases ✓ /  $[\text{H}_3\text{O}^+]$  neem toe (4)

[10]

**TOTAL/ TOTAAL: 150**