



TOM NEWBY SCHOOL EXAMINATION



Subject	Geography	Examiner	Mr Singh
Date	10 June 2014	Total marks	50
Session	2	Duration	1 Hour
Grade	4	Moderator	Mrs Pienaar
Special instructions/ Equipment	1) Make sure that you check the mark allocation of each question before you answer it. 2) Do not rush your work – Slow and steady wins the race. 3) Watch your spelling – Up to 10% may be deducted for excessive spelling errors. 4) Please work neatly.		

This Exam has been compiled using notes and information contained in the Tom Newby School book. The marking memorandum has been compiled accordingly. While alternative responses will be given due acknowledgement, the official memorandum will be considered a priority document to ensure uniformity of marking. Up to 10% of the total mark allocation may be deducted for spelling and grammatical errors, except in the case of Language papers, where deductions are made according to a memorandum.

NAME: _____

GRADE 4: _____

Question 1: **[8 Marks]**

A. Choose the correct word from the words in the BOX to complete the sentences below.

LOCAL	RURAL	BUILDING VIEW
COASTAL	URBAN	PLAN VIEW
NATURAL	MAN MADE	SIDE VIEW

1. When an object is viewed from the TOP, it is called a Plan view.
2. Villages and Farms are found in Rural areas.
3. Mountains and rivers known as Natural Landmarks.
4. Cities and Town are known as Urban areas. (4)

B. People who live in different type of settlements meet their basic needs in different ways.

Name 4 basic needs people have:

a) Food

b) Water

c) Shelter

d) Warmth



(4)

041 Energy
041 Medicine.

Question 2:

[7 Marks]

A. Match symbols in column A with correct description in column B. Write only the correct letter.

Column A	Column B
1 	A. a Mosque
2. 	B. A shop
3.	C. Garage
4.	D. school
5.	E. soccer field

1 E 2 A 3 B 4 C 5 D

(5)

B. Explain what the following things are:

A Compass:

An instrument to tell direction (N, S, E, W).

A Map Key:

Symbols to show areas or places on a map.
Found in the corner/side of a map (2)

Question 3:

[14 Marks]

A. Just write True or False on the line below each sentence.

1. The Atlantic Ocean is a warm ocean False

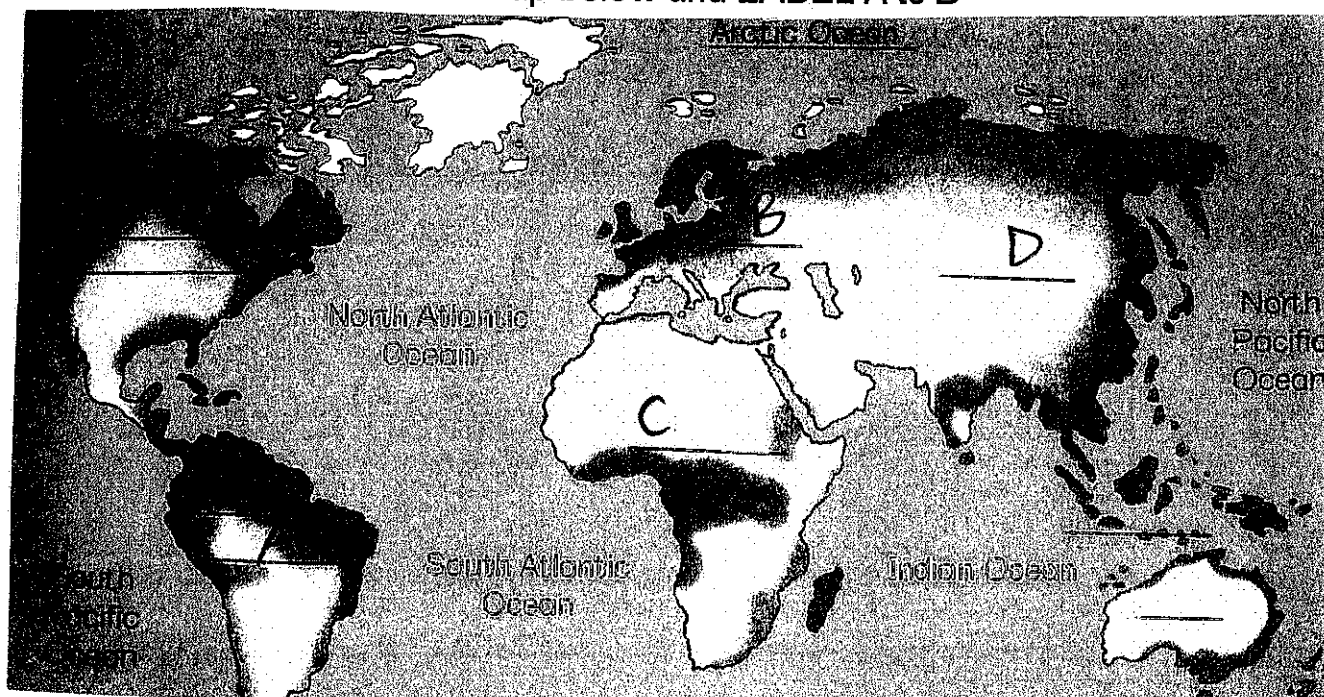
2. A relief map shows different heights and shapes of the land's surface.

True

3. South Africa has only 9 Provinces True

4. The Indian Ocean is west of Australia True (4)

B. Look at the world map below and LABEL A to D



A South America

B Europe

C Africa

D Asia (4)

C. South Africa is found at the tip of Africa.

1. Do you think that South Africa is a large country or small country in AFRICA.

Large (1)

2. Do you think that because South Africa is at the southern most tip of Africa makes it more or less important than other African countries? Explain why you would say so.

More . Travelling overseas is easier
Bying and selling goods overseas
or

less . Far from North Africa and cannot trade
easily with these countries .

(2)

D. South African provinces - write the name of the capital cities for the following provinces given:

PROVINCE	CAPITAL CITY
WESTERN CAPE	a) Cape Town
KWAZULU NATAL	b) Pietermaritzberg
MPUMALANGA	c) Nelspruit

(3)

Question 4:

[11 Marks]

Draw/Translate/Interpret/Show

- A. Look at the following pictures A to F and answer the questions about them..

1. List 3 photographs that were taken from the TOP:

WRITE DOWN THE CORRECT LETTER ONLY

a) B

b) D

c) C

2. List 3 photographs that were taken from the SIDE:

WRITE DOWN THE CORRECT LETTER ONLY

a) A

b) E










c) F

(6/2=3)

B. Contrast/Find/Compare/Investigate/Test/Outline/Examine

1. Find the following pictures on the GRID below:

(Write down the Grid Letter and the number for each place)

	1	2	3	4
A				
B				
C				
D				

Eg. The Triangle B2

1. The Heart D1 2. Lightning bolt D3

3. The Arrow C4 4. Smiley Face A3

5. The tree A1 6. Box A4

7. The flower C2 8. Hat B1

(8)

Question 5:**[10 Marks]****Predict/Rank/Justify/Deduce/Conclude**

A. Look at the map and answer the following questions about direction.

(WRITE YOUR ANSWER AS: **EAST, WEST, NORTH OR SOUTH**)

1. If you go from C to V, which direction are you going in?

West

2. If you go from A to V, which direction are you going in?

East

3. If you go from B to V, which direction are you going in?

South

4. If you go from D to V, which direction are you going in?

North

5. If you go from V to C, which direction are you going in?

East

6. If you go from V to D, which direction are you going in?

South

(6)

B. WORK WITH A MAP

Look at the map of the school

- Mark where your classroom is. Write 'My class' in the correct place on the map.
- Mark where the hall is. Label the correct building 'Hall'.

Now draw in the shortest route you could walk, from your classroom to the hall (use a coloured pencil or pen). (4)

FINAL TOTAL: 50 MARKS