




TOM NEWBY SCHOOL EXAMINATION

Subject	GEOGRAPHY	Examiner	MRS WALKER
Date	9 JUNE 2015	Total marks	50
Session	2	Duration	1 HOUR
Grade	4	Moderator	MRS A SINGH
Special instructions/ Equipment			

This Geography Exam has been compiled using notes and information contained in the Tom Newby School book. The marking memorandum has been compiled accordingly. While alternative responses will be given due acknowledgement, the official memorandum will be considered a priority document to ensure uniformity of marking. Up to 10% of the total mark allocation may be deducted for spelling and grammatical errors, except in the case of Language papers, where deductions are made according to a memorandum.

Name and Surname: _____ **Grade:** 4 _____

INSTRUCTIONS:



Read and answer all questions carefully!
 Answer the questions neatly on the question paper
 Use full sentences if a sentence is required

QUESTION 1 **MAPWORK**

Carefully study the map of South Africa on page 2 and then answer the questions. Look at the key carefully.

1. Name the Provinces and their Capitals.

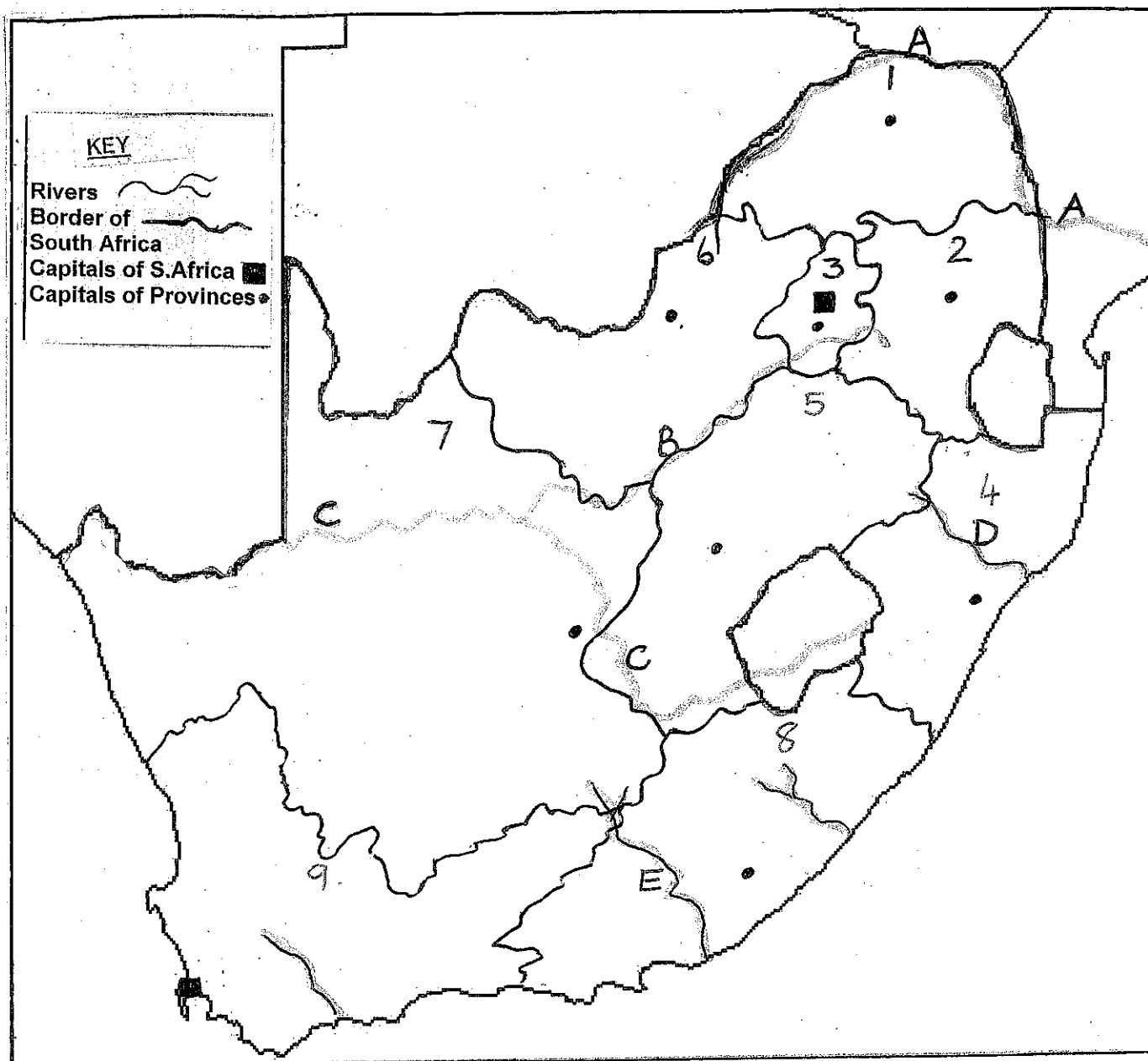
<u>Provinces</u>	<u>Capitals</u>
1. Limpopo	1. Polokwane
2. Mpumalanga	2. Nelspruit
3. Gauteng	3. Johannesburg
4. KwaZulu Natal	4. Pietermaritzburg
5. Free State	5. Bloemfontein
6. North west	6. Mahikeng
7. Northern Cape	7. Kimberley
8. Eastern Cape	8. Bisho
9. Western Cape	9. Cape Town

(9)

2. Name the national capital in province number three (3)

Pretoria

(1)



3. Name the rivers labelled on the map

a. Limpopo River	b. Vaal River
c. Orange River	d. Tugela.
e. Great Fish River.	

(5)

QUESTION 2

Explain the meaning of the following terms/words.

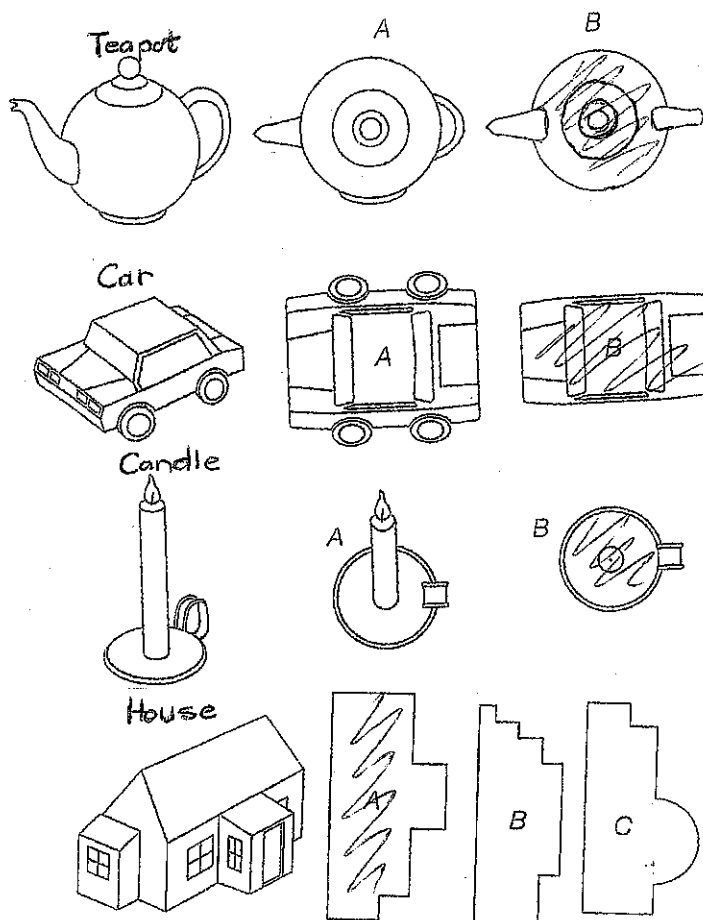
- a. Plan view: A map or picture drawn from the top.

- b. Rural area: An area in the countryside or farming area with low population density / far from city / few roads houses facilities.
- c. Informal Settlement: A settlement not properly planned which has small shacks/huts no proper services or facilities
- d. Land mark: An object or place that help you find your location and can be use to give directions to a destination
- e. Population density: How many people live in an area. How closely people live together
- f. A compass: An instrument used to find direction. It has 4 cardinal points, North, south, east, west.

(6)

QUESTION 3

Colour in the correct top view/plan view of the object below.



(4x1/2=2)

QUESTION 4**BASIC NEEDS**

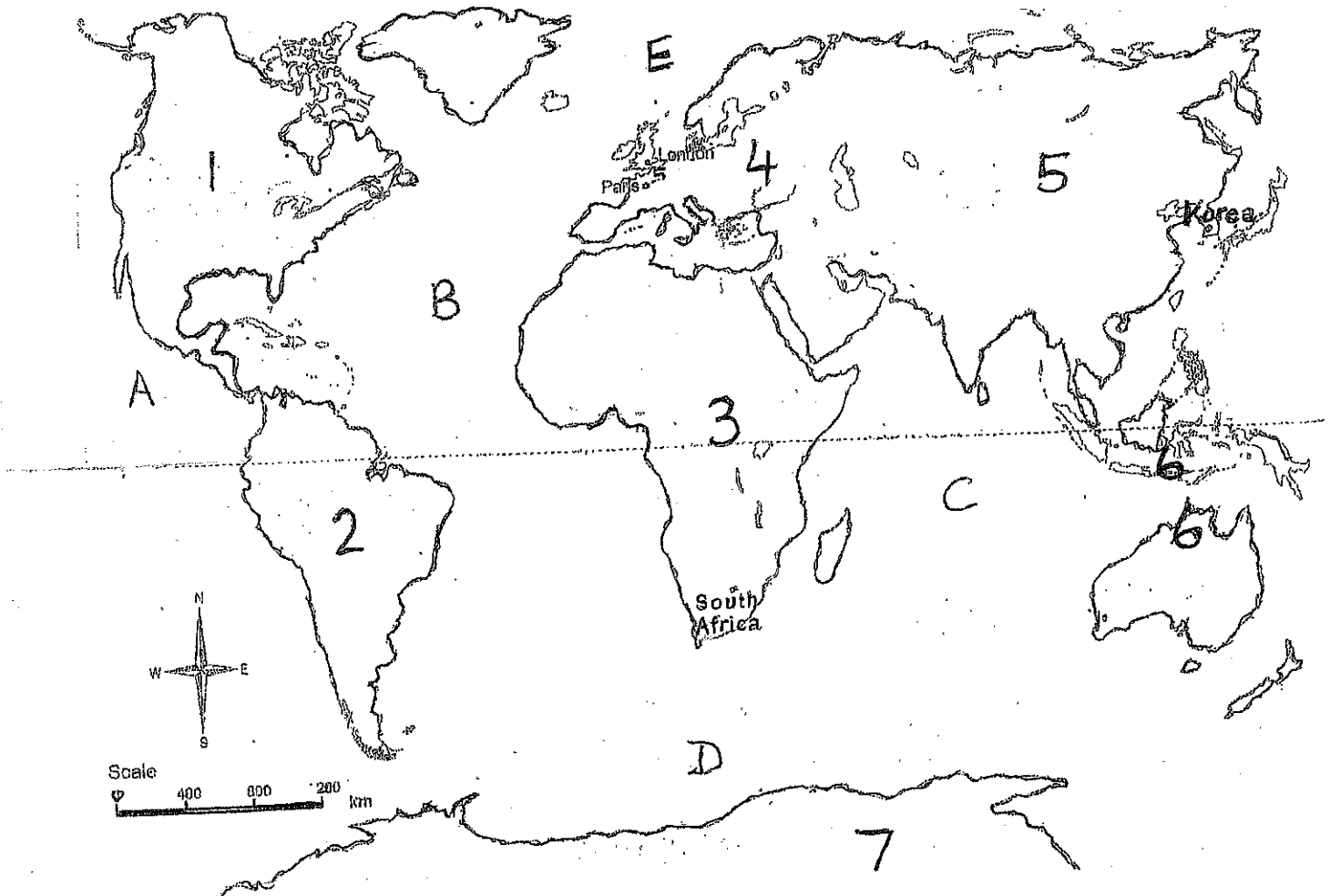
Name the services that are provided by a town or city to satisfy the following basic needs:

<u>Basic Needs</u>	<u>Services</u>
a. Water	Water pipes, taps, reservoirs
b. Transport	Buses, trains,
c. Energy	Electricity,
d. Medical care	Hospitals, clinics
e. Shelter	Houses, flats, huts

(5)


QUESTION 5

Write the names of the Oceans and Continents on page 5 and fill in the missing name words in the sentence.



QUESTION 7**LANDMARKS**

- a) We move around our settlement on roads and foot paths. If we get lost we look for a landmark to help us to find our way. A tree is an example of a natural landmark. A robot is an example of a man made landmark. (2)
- b) Below is the city of Cape Town. Look at the picture carefully then answer the questions that follow:



- 1) Name two natural landmarks and two man-made landmarks that are visible in the picture:

Natural**Man-made**

- 1) Mountain, open field
1) Ocean, Coast line, trees


- 2) Flats, harbour, shops
2) Stadium, houses

(4)

- 2) Name two man made features/Land Marks that you can see on your drive to Tom Newby School. **Remember** – the feature you choose must be outstanding and easy to see so you can use it to give directions.

- a) Lakeside mall, N12 Highway
Church, Bridge, Engine garage etc

(8) 2

TOTAL : 50

ALL DONE! NOW GO THROUGH AND CHECK
YOUR WORK!