



TOM NEWBY SCHOOL EXAMINATION



Subject	Geography	Examiner	Miss M Albertyn
Date	15 June 2017	Total marks	50
Session	1	Duration	1
Grade	4	Moderator	Mrs W Pienaar
Special instructions/ Equipment			

This Exam has been compiled using notes and information contained in the Tom Newby School book. The marking memorandum has been compiled accordingly. While alternative responses will be given due acknowledgement, the official memorandum will be considered a priority document to ensure uniformity of marking.

NAME: _____

CLASS: 4 _____

Instructions

- Read the questions carefully.
- Look at the mark allocation.
- Answer all the questions and work neatly.
- Think carefully before you answer.
- Breathe, relax and best of luck!

QUESTION A

MAPWORK

[24]

1. Look at the grid below and answer the questions that follow. [6]

1.1 Identify and name the object at the following grid references

a. B4 _____

b. E5 _____

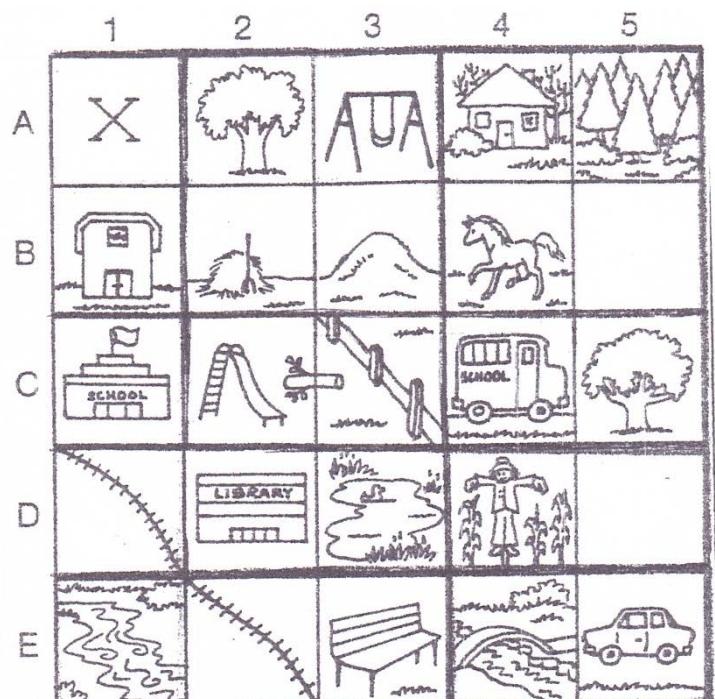
c. C1 _____

1.2 Identify and give the grid references for each of the following symbols:

a. bench _____


b. slide _____

c. scarecrow _____



2. Label the 8 compass points:

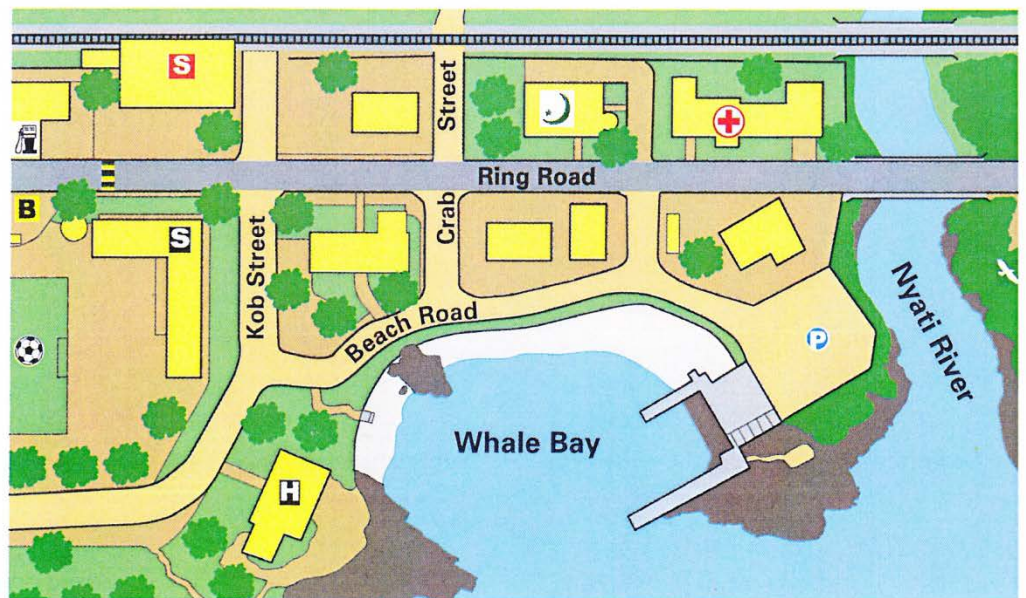
[8÷2=4]



3. Study the map and key below, then answer the questions that follow:

Key

-  mosque
-  bus stop
-  train station
-  school
-  hotel
-  clinic
-  tarred road
-  gravel road
-  railway line
-  bird sanctuary
-  parking
-  bridge
-  sports ground
-  petrol station



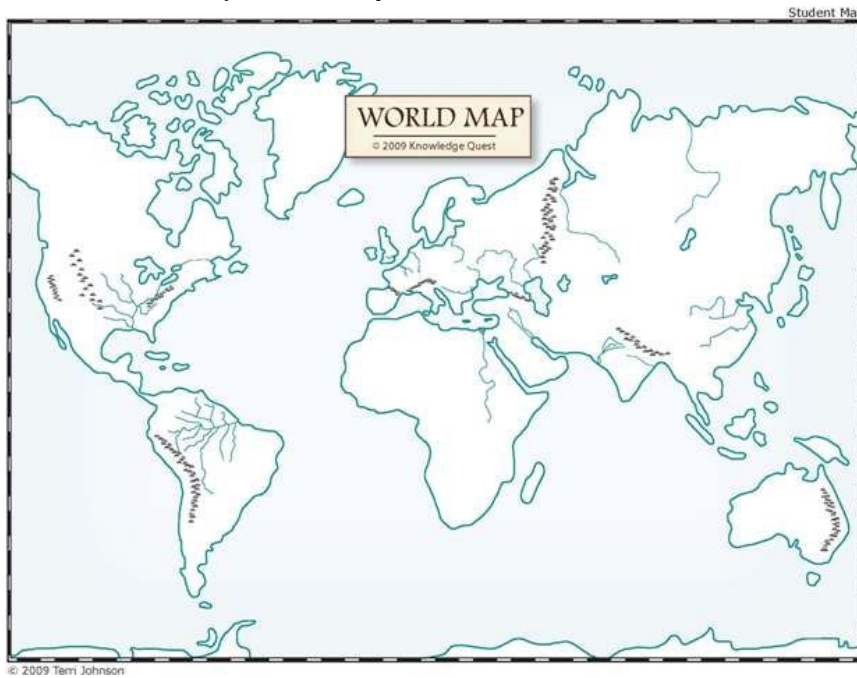
From: OXFORD Junior Atlas for South Africa page 6

Use the 8 compass points. Imagine you are at the school. What direction is each of the following **from** you? [4]

- a. The petrol station _____
- b. The train station _____
- c. The sports ground _____
- d. The hotel _____

4. Describe the route, **without using compass points**, from the hotel to the clinic. Include one landmark. [5]

5. Look at the world map carefully and label a to e. [5]



a) _____

b) _____

c) _____

d) _____

e) _____

QUESTION B **TRUE OR FALSE** **[8]**

State whether the following facts are true or false. If false, correct them.


1. The sun rises in the North.

2. There are mostly tar roads in a rural area.

3. People can get very ill if they do not have a clean supply of water.

4. A low population density means people are more spread out from each other.

5. The building below is used for keeping fire engines safe.

**QUESTION C** **MATCH THE COLUMNS** **[5]**

Match column A with Column B. Write the correct letter below the appropriate number in the table.

	<u>Column A</u>		<u>Column B</u>
1.	community	a.	office job
2.	human needs	b.	medicines
3.	urban areas	c.	energy
4.	industries	d.	service job
5.	clinic	e.	factories

1.	2.	3.	4.	5.

QUESTION D **DEFINITIONS** **[5]**

1. Give one or two words for each of the following

- a. The town where the leader and officials of the province work. (1)

b. Very big areas of land. (1)

c. Features that stand out in an area. (1)

d. A settlement that is smaller than a town, but bigger than a farm. (1)

e. The line where the land meets the sea. (1)

QUESTION E

SETTLEMENTS

[8]

Look at the picture below and answer the questions that follow.



a. What type of settlement is this? _____ (1)

b. Name 1 type of job that the people in this picture have. How can you tell?

_____ (2)

c. Why do you think people enjoy living in this type of settlement? Give 2 reasons. _____

_____ (2)

d. Do you think the people living here have running water? Give a reason for your answer. _____

_____ (2)

e. What do you think these people use to cook their food?

_____ (1)

PLEASE CHECK YOUR WORK CAREFULLY!



TOM NEWBY SCHOOL EXAMINATION



Subject	Geography	Examiner	Miss M Albertyn
Date		Total marks	50
Session		Duration	1
Grade	4	Moderator	Mrs W Pienaar
Special instructions/ Equipment			

This Exam has been compiled using notes and information contained in the Tom Newby School book. The marking memorandum has been compiled accordingly. While alternative responses will be given due acknowledgement, the official memorandum will be considered a priority document to ensure uniformity of marking.


QUESTION 1

MAPWORK

[24]

- 1.1 a. horse (1)
 b. car (1)
 c. school (1)
- 1.2.a. E3 (1)
 b. C2 (1)
 c. D4 (1)

2.



- 3a. NW (1)
 b. N (1)
 c. SW (1)
 d. SE (1)

4. At the entrance of the hotel turn right into Beach Road..

Turn left into Crab Street.

Turn right into Ring Road.

Pass the mosque on your left.

The clinic will be on your left.

- 5a. Europe (1)
- b. Asia (1)
- c. Antarctica (1)
- d. Australia (1)
- e. Indian Ocean (1)

QUESTION B **TRUE OR FALSE** **[8]**

1. False – East (2)
2. False – sand roads / urban (2)
3. True (1)
4. True (1)
5. False – machines / produce (1)

QUESTION C **MATCH THE COLUMNS** **[5]**

1.	2.	3.	4.	5.
d.	c.	a.	e.	b.

QUESTION D **DEFINITIONS** **[5]**

- a. Provincial capital (1)
- b. continent (1)
- c. landmarks (1)
- d. village (1)
- e. coastline (1)

QUESTION E **SETTLEMENTS** **[8]**

- a. rural (1)
- b. plant crops / farm / look after sheep
the tractor / sheep (2)
- c. quiet / no pollution (any logical answer) (2)
- d. no – windmill in picture (2)
- e. coal stoves / paraffin stoves (any 1) (1)