



## TOM NEWBY SCHOOL EXAMINATION



<b>Subject</b>	<b>Geography</b>	<b>Examiner</b>	<b>Miss M Albertyn</b>
<b>Date</b>	<b>8 June 2018</b>	<b>Total marks</b>	<b>50</b>
<b>Session</b>	<b>1</b>	<b>Duration</b>	<b>1 hour</b>
<b>Grade</b>	<b>4</b>	<b>Moderator</b>	<b>Mrs W Pienaar</b>
<b>Special instructions/ Equipment</b>			

This Exam has been compiled using notes and information contained in the Tom Newby School book. The marking memorandum has been compiled accordingly. While alternative responses will be given due acknowledgement, the official memorandum will be considered a priority document to ensure uniformity of marking.

**NAME:** \_\_\_\_\_

**CLASS:** 4 \_\_\_\_\_

Instructions

- Read the questions carefully.
- Look at the mark allocation.
- Answer all the questions and work neatly.
- Think carefully before you answer.
- Breathe, relax and best of luck!



**SECTION A**

**Short questions**

[15]

1. Name 4 basic needs that every human being needs to survive. (4)

a. food to eat ✓ \_\_\_\_\_

b. clean water ✓ \_\_\_\_\_

c. place to stay ✓ \_\_\_\_\_

(any 4)

1

d. energy ✓ \_\_\_\_\_

name

able to go to hospitals/clinics ✓

2. Explain what relief maps are. (1) 1

Relief maps show different heights of land ✓ \_\_\_\_\_

Describe

3. Complete the following sentences:

a. The key found on a map can be described as a list of symbols with their meanings ✓ 1

\_\_\_\_\_ (1) Recall

b. A symbol found on a map can be described as a sign or picture that is used in place of an object. ✓ (1) Describe 2

4. Name the Judicial capital of South Africa. (1) 1  
\_\_\_\_ Bloemfontein ✓ \_\_\_\_\_ Recall

5. Which two independent countries are found within South Africa? (2) 1  
\_\_\_\_ Lesotho ✓ \_\_\_\_\_ Recall  
\_\_\_\_ Swaziland ✓ \_\_\_\_\_

6a. Name the Legislative capital of South Africa. (1)  
\_\_\_\_ Cape Town ✓ \_\_\_\_\_  
b. In which province is this city found? (1) 1  
\_\_\_\_ Western Cape ✓ \_\_\_\_\_ Recall

4a. Label the oceans to the east and west of South Africa. (2)

Atlantic Ocean ✓



1 Label

Indian Ocean ✓

b. Which ocean is the warmest of the two? (1) 1  
\_\_\_\_ Indian Ocean ✓ \_\_\_\_\_ Name

**SECTION B**

**MATCH THE COLUMNS**

**[5]**

Match column A with Column B. Write the correct number below the appropriate letter in the table.

	<u>Column A</u>		<u>Column B</u>
1.	rural	a.	objects that stand out
2.	clinic	b.	mountain
3.	landmarks	c.	villages
4.	settlements	d.	get medicines
5.	natural feature	e.	places where people live together

5

1.	2.	3.	4.	5.
c ✓	d ✓	a ✓	e ✓	b ✓

choose

**SECTION C**

**Apply, analyse and evaluate**

**[20]**

1. Read the speech bubbles. Arrange them according to people talking about **rural** areas and people talking about **urban** areas, by writing the correct letter in the table. (5)

The municipality needs to collect our rubbish.

a.

Heavy rains washed away our crops last year.

b.

We have to travel a long way to the clinic and school.

c.

Our settlement is very crowded.

d.

There is nowhere for us to play.

e.

4

Arrange

About rural areas	About urban areas
b ✓	a ✓
c ✓	d ✓
	e ✓

2. Look at the picture carefully and answer the questions that follows.



a. What do we call this kind of 'road'?

(1) 3

\_\_\_\_\_ footpath ✓ \_\_\_\_\_

Apply


b. Where do you think they got their water from?

(1) 3

\_\_\_\_\_ river / well / water tanker ✓ \_\_\_\_\_

Apply

3. Look at the picture below carefully to help you answer the questions that follow.



a. What type of settlement is this?

(1) 3

\_\_\_\_\_ urban / city ✓ \_\_\_\_\_

Apply

b. Name 3 different jobs that people in this picture have.

(3) 4

\_\_\_\_\_ nurse ✓ \_\_\_\_\_

Examine

\_\_\_\_\_ delivery man ✓ \_\_\_\_\_ (any logical answer) \_\_\_\_\_

\_\_\_\_\_ farmer ✓ \_\_\_\_\_

c. Name 2 disadvantages, or problems, for people living in a city. (2) 4

\_\_\_\_\_ **pollution** ✓ \_\_\_\_\_ **Deduce**  
\_\_\_\_\_ **noise** ✓ \_\_\_\_\_ **(any logical answer)** \_\_\_\_\_

d. Would you like to live in a rural area or an urban area? Give a good reason for your answer. (1) 5

\_\_\_\_\_ **e.g. rural – quiet, fresh air** ✓ \_\_\_\_\_ **Tell why**  
\_\_\_\_\_ **(any logical answer)** \_\_\_\_\_  
\_\_\_\_\_  
\_\_\_\_\_  
\_\_\_\_\_

e. What do you think the **main reason** is for people moving to a city? (1) 5


\_\_\_\_\_ **jobs** ✓ \_\_\_\_\_ **(any logical answer) Tell why**  
\_\_\_\_\_  
\_\_\_\_\_  
\_\_\_\_\_  
\_\_\_\_\_  
\_\_\_\_\_

f. Compare the buildings in the picture to buildings on a farm. (1) 5

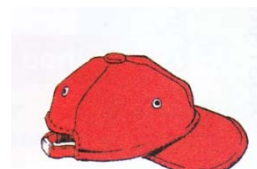
\_\_\_\_\_ **City – tall, many** ✓ \_\_\_\_\_ **Compare**  
\_\_\_\_\_ **Farm – small, few** \_\_\_\_\_ **(any logical answer)** \_\_\_\_\_  
\_\_\_\_\_  
\_\_\_\_\_  
\_\_\_\_\_  
\_\_\_\_\_  
\_\_\_\_\_  
\_\_\_\_\_

7a. These are pictures showing a \_\_\_\_\_ **side** ✓ \_\_\_\_\_ view. (3)

i.



ii.



(1)

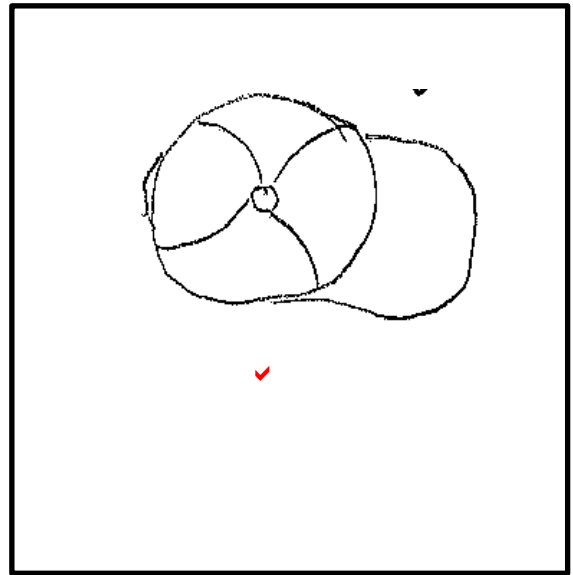
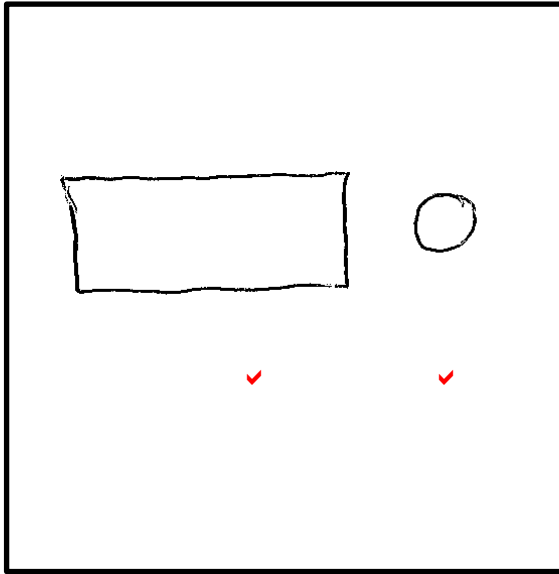
b. Draw the pictures in 7a from a plan view.

3

i.

ii.

Apply




**SECTION D**

**Mapwork**

[10]

1. Look at the picture. Say what direction Mandy must walk to reach each of the following.



a. the house  N  ✓

(1) 3

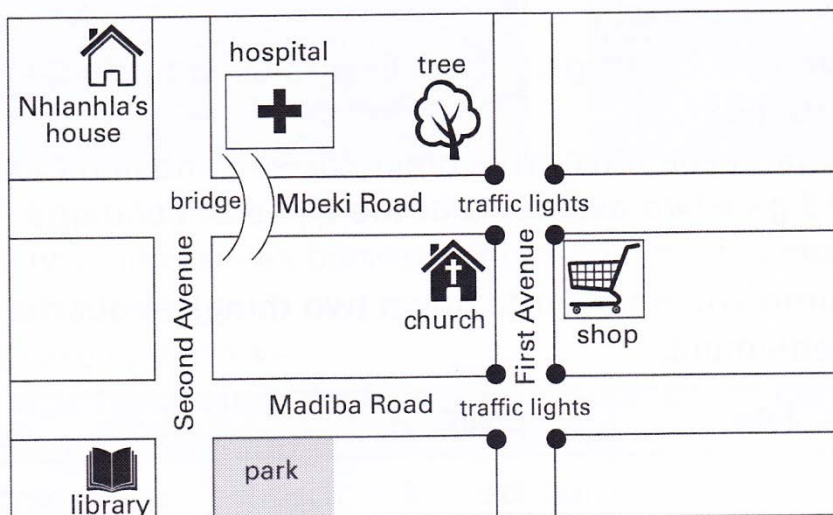
b. the tap  W  ✓

(1) Apply

c. the sun  E  ✓

(1)

2. Look at the map carefully and answer the questions that follow.



a. Using the 4 compass points, describe the route from Nhlanhla's house to the shops. Include 4 landmarks she passes on her way.

(7) 3

Apply

\_\_\_ Turn right into Second Avenue ✓ \_\_\_\_\_

\_\_\_ Turn left into Mbeki Road ✓ \_\_\_\_\_

\_\_\_ The hospital will be on your left. / Go under a bridge. ✓ \_\_\_\_\_

\_\_\_ Pass a tree on your left, and a church on you right ✓ \_\_\_\_\_

\_\_\_ Turn right into First Avenue ✓ \_\_\_\_\_

\_\_\_ The shop will be on your left ✓ \_\_\_\_\_

---

---

---

---

---

---

---

---

Please check your work **carefully**.