



TOM NEWBY SCHOOL EXAMINATION



Subject	Geography	Examiner	Miss M Albertyn
Date	07 November 2019	Total marks	40
Session		Duration	1 hour
Grade	4	Moderator	Mrs M Fourie
Special instructions/ Equipment			

This Exam has been compiled using notes and information contained in the Tom Newby School book. The marking memorandum has been compiled accordingly. While alternative responses will be given due acknowledgement, the official memorandum will be considered a priority document to ensure uniformity of marking.

Name:	Surname:	Class: 4
--------------	-----------------	-----------------

Instructions

- Read the questions carefully before answering.
- Check the mark allocation for each question.
- Answer all the questions on the question paper.
- Work neatly.
- Breathe, relax and best of luck!
- **Check your exam once you have finished.**



This paper is made up of two sections: **Section A (34 marks)** and **Section B (6 marks)**

SECTION A: (34 marks)

QUESTION 1

FILL IN ANSWERS

(11)

1.1 Give one reason why foods are processed.

(1)

1.2 Name 4 sources of fresh water found in nature.

(4)

a) _____

b) _____

c) _____

d) _____

1.3 Write a good sentence to explain what 'commercial farming' is. (1)

1.4 Complete the following:

The amount of salty water on earth is ____%.

1.5 Give 2 examples of how we can conserve water (use it wisely). (2)

1.6 Compare wheat and sugar cane by completing the table below. (2)

Crop	Climate the crop grows best in
Wheat	
Sugar cane	


QUESTION 2

IMAGES

(16)

2.1 Complete the following table, by filling in the correct information. (12÷2=6)

A.



B.



C.



Name of food	Plant or animal?	Processed or unprocessed?	If processed, how?
A.			
B.			
C.			

2.2 Use the words in the text box below to complete the sentences. (10)

soaks	evaporates	rain	streams	circle
atmosphere	condense	oceans	rivers	hail

Water moves between the _____, the ocean and the land all the time. This is called the natural water cycle.

When the sun heats the water in the oceans it _____, and vapours rise and _____ into clouds. These clouds move over the land. _____, snow or _____ falls from these clouds.

This fresh water fills _____ and _____. It also _____ into the ground. It eventually flows back into the _____ where evaporation takes place again.

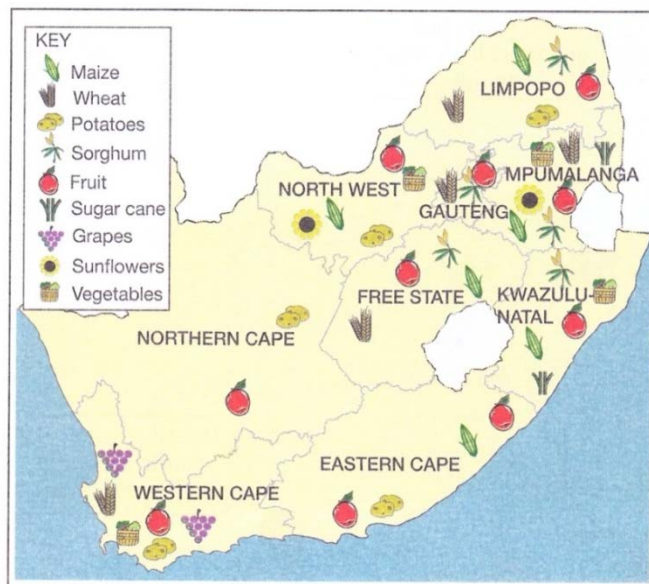
This is why it is called a water cycle - it constantly goes round and round in a _____.

QUESTION 3

MAPWORK

(4)

Study the map below carefully and answer the questions that follow.




3.1 List the provinces where sunflower farms are found. (2)

3.2 What crop is grown in every province of South Africa? (1)

3.3 Name the province where there are grape farms. (1)

QUESTION 4 **EXAMINE PICTURE** (3)

Examine the picture below and answer the questions that follow.



4.1 What is going into the river? (1)

4.2 Name 2 problems this action will cause. (2)

SECTION B: (6 marks)

QUESTION 5 **TRUE OR FALSE** (3)

State whether the following statements are true or false. If false, correct them.

5.1 Poultry are chickens, ducks and rabbits.

5.2 The biggest user of water in South Africa is mining.

5.3 Dairy cattle are bred for their milk.

QUESTION 6**MATCH THE COLUMNS****(3)**

Match column A with Column B. Write the correct number below the appropriate letter in the table.

Column A	Column B
1. wetlands	a. small flowing body of water
2. batteries	b. egg laying chickens are kept in these
3. small stock	c. cattle and sheep
	d. when the level of underground water reaches the surface of the land
	e. pigs and goats

1.	2.	3.
----	----	----

Total: 40

Grade 4 Geography Exam November 2019
Performance analysis
 (For teacher use only)

Section A (34)

Question Number	1	2.1	2.2	3	3
Possible Mark	11	6	10	4	3
Learner Mark					

Section B (6)

Question Number	5	6
Possible Mark	3	3
Learner Mark		