



## TOM NEWBY SCHOOL EXAMINATION



<b>Subject</b>	<b>Geography</b>	<b>Examiner</b>	<b>Miss C Prinsloo</b>
<b>Date</b>	<b>11 June 2015</b>	<b>Total marks</b>	<b>50</b>
<b>Session</b>	<b>2</b>	<b>Duration</b>	<b>2 hours</b>
<b>Grade</b>	<b>5</b>	<b>Moderator</b>	<b>Mrs W Pienaar</b>

This Exam has been compiled using notes and information contained in the Tom Newby School book. The marking memorandum has been compiled accordingly. While alternative responses will be given due acknowledgement, the official memorandum will be considered a priority document to ensure uniformity of marking. Up to 10% of the total mark allocation may be deducted for spelling and grammatical errors, except in the case of Language papers, where deductions are made according to a memorandum.

**Name:** \_\_\_\_\_ **Grade 5:** \_\_\_\_\_

**Instructions:**

1. Read all questions carefully and answer on the question paper.
2. Take care with spelling and punctuation.
3. This exam paper consists of 5 pages, 6 questions.

Good Luck!!

**Question 1:** (7)

Match the natural feature in column A with the description in column B. Write only the number in the block below.


Column A:	Column B:
A. Cape	1. The start of a river or stream in the mountains.
B. Bay	2. All rivers and streams in a catchment area.
C. River Mouth	3. All the rivers in the same area.
D. River source	4. The point where the river flows into the sea.
E. Valley	5. When the water falls quickly down over a steep slope.
F. River System	6. A dent in the coastline.
G. Waterfall	7. The streams and rivers flow down _____ between the hills.
	8. Stronger rocks that weren't worn down by the sea and that stick out into the sea.
	9. A small river.

<b>A:</b>		<b>B:</b>		<b>C:</b>		<b>D:</b>		<b>E:</b>		<b>F:</b>		<b>G:</b>	
-----------	--	-----------	--	-----------	--	-----------	--	-----------	--	-----------	--	-----------	--

**Question 2:**

(9)

2.1. Study the diagram below and write 6 points on the “life cycle” of a river:



---

---

---

---

---

---

---

---

---

---

(6)

2.2. Give two examples of precipitation:

---

(2)

2.3. Why does a river start in the mountains?

---

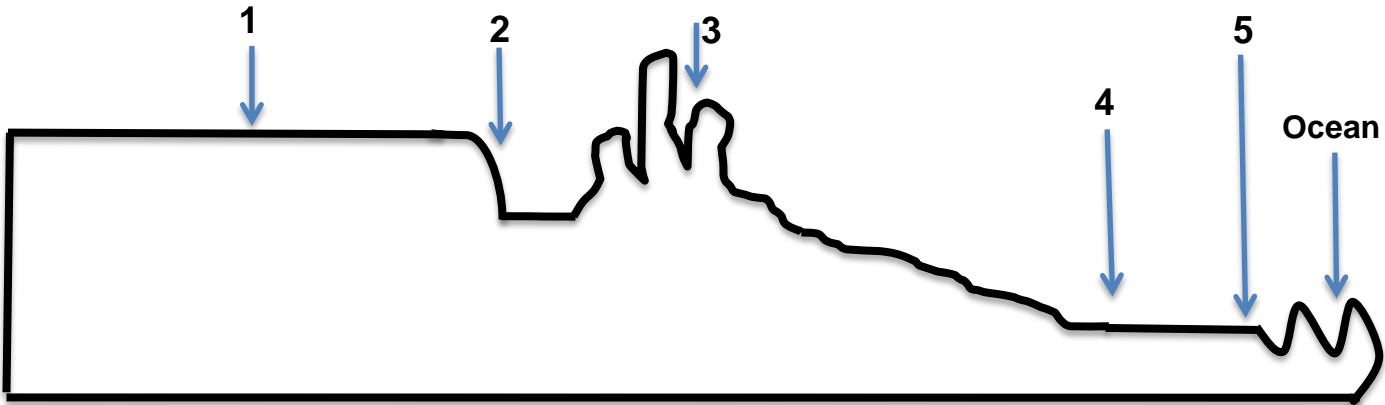
---

(1)

**Question 3:**

(10)

3.1. The diagram below shows how the build of South Africa changes. Label the different areas on the line provided:



1. \_\_\_\_\_ 2. \_\_\_\_\_

3. \_\_\_\_\_ 4. \_\_\_\_\_

5. \_\_\_\_\_

(5)

3.2. What is the difference between a coastal plain and a plateau?

---

---

---

(2)

3.3. What is the name of the plateau found in the interior of South Africa?

---

(1)

3.4. Name two provinces where a coastal plain can be found:

---

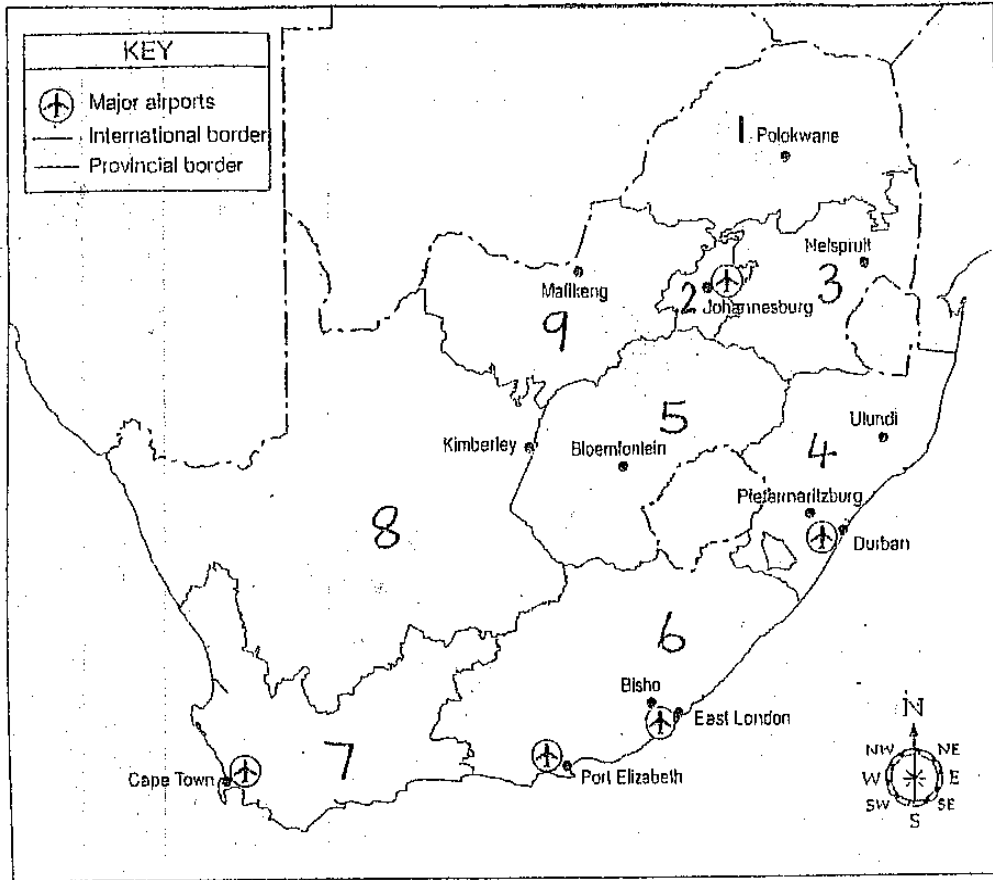
---

(2)

**Question 4:**

(15)

Study the map below and answer the questions that follow:



a. Fill in, on the lines below, the name of each province:

- 1. \_\_\_\_\_
- 2. \_\_\_\_\_
- 3. \_\_\_\_\_
- 4. \_\_\_\_\_
- 5. \_\_\_\_\_
- 6. \_\_\_\_\_
- 7. \_\_\_\_\_
- 8. \_\_\_\_\_
- 9. \_\_\_\_\_

b. Name two neighboring countries that lie within South Africa's borders:

\_\_\_\_\_ (2)

c. Name one of South Africa's neighboring countries that lies east of Limpopo:

\_\_\_\_\_ (1)

d. If I travel from Cape Town to Polokwane, what direction will I travel in?

\_\_\_\_\_ (1)

e. If I travel in a straight line from Port Elizabeth to Bloemfontein, how many provincial borders will I cross?

\_\_\_\_\_ (1)

f. How many major airports are there in South Africa according to this map?

\_\_\_\_\_ (1)

**Question 5:**

Physical features of Africa:

(5)

5.1. What is the name of the desert that covers 12 countries of Africa found in the Northern hemisphere?

\_\_\_\_\_ (1)

5.2. What is the name of the highest mountain in Africa and where is it situated?

\_\_\_\_\_ (2)

5.3. What is the longest river in Africa?

\_\_\_\_\_ (1)


5.4. Where is the Namib desert found?

\_\_\_\_\_ (1)

**Question 6:**

(4)

Study the picture below and answer the questions that follow:



6.1. Identify the location of each of the following by writing the correct grid reference point.

- The Mac Donald's sign: \_\_\_\_\_ (1)
- The person surfing: \_\_\_\_\_ (1)

6.2. Draw an appropriate symbol that could be used as a key for this picture, for the following:

Hospital: (1)

Rail roads: (1)

**Total for exam: 50**