



TOM NEWBY SCHOOL EXAMINATION



Subject	History	Examiner	Mrs. P. Singh
Date	9 June 2016	Total marks	50
Session	1	Duration	1 hour
Grade	5	Moderator	Miss Albertyn
Special instructions/ Equipment			
This assessment has been compiled using notes and information contained in the Tom Newby School resource material. The marking memorandum has been compiled accordingly. While alternative responses will be given due acknowledgement, the official memorandum will be considered a priority document to ensure uniformity of marking.			

Name:	Surname:	Class:
--------------	-----------------	---------------

Question 1 – The San (Way of Life)

State whether the following are True or False. If False, correct the statements.

1.1 The San had a special leader or chief to sort out disagreements.

1.2 The San moved from place to place in search of ripe berries and plants or roots that they could eat.

1.3 The San always took lots of natural resources from nature even if they did not need it.

1.4 The San believed that animals were a gift from the gods.

1.5 The San store water deep underground, in buckets.

Question 2 – San (Hunting)

Match the letter from Column A with the correct number from Column B.

Write down only the number next to the correct letter.





Column A	Column B
A. string of a bow	1. Track or follow animals after they have been shot.
B. poison	2. portable case used for holding arrows.
C. San hunters	3. Made from animal gut or plant fibre.
D. a quiver	4. poison could take up to 12 hours to kill them.
E. bucks	5. put on the tip of the arrow.

A. _____ B. _____ C. _____ D. _____ E. _____

(5)

Question 3 – San (Medicine)

Use the pictures to complete the table below.

Picture	Name of the plant	Name the illness that this plant cures
1. 	a. _____	b. _____ _____
2. 	a. _____	b. _____ _____
3. 	a. _____	b. _____ _____
4. 	a. _____ _____	b. _____ _____

(8)

Question 4 – San (Rock Art)

4.1 Where was the Linton Panel found?

_____ (1)

4.2 In what year was the Linton Panel cut from the rock?

_____ (1)

4.3 Where was the panel taken to?

_____ (1)

4.4 The human figures on the Linton panel are used as part of an important logo. What is the logo called?

_____ (1)

4.5 What does the motto “!KE E: /XARRA //KE” mean?

_____ (1)

Question 5 – The Khoi

5.1 Tabulate 4 differences between the San and the Khoi.

The San	The Khoi
a) _____ _____	a) _____ _____
b) _____ _____	b) _____ _____
c) _____ _____	c) _____ _____
d) _____ _____	d) _____ _____

(8)

Question 6 – The First African Farmers

6.1 Write a paragraph about any five similarities between the Khoi and the first farmers.

(5)

6.2a. Do you think the first farmers thought about their environment a lot?

(1)

b. Explain why you say yes or why you say no.

(1)

6.3 What do you think they thought about?

(1)

6.4 One of the problems the first farmers faced was overgrazing. Do you think that farmers today still face the problem of overgrazing? Explain your answer.

(1)

6.5 Explain the Mafisa System.

(3)

6.6 Cattle was a very important part of African farming life. List 3 reasons why they were important.

a. _____

b. _____

c. _____

(3)

6.7 What is Lobola?

(2)

6.8 What is your opinion of the Lobola System?

(2)