



# TOM NEWBY SCHOOL EXAMINATION



1

<b>Subject</b>	<b>HISTORY</b>	<b>Examiner</b>	<b>MRS L. MULLER</b>
<b>Date</b>	<b>3 June 2019</b>	<b>Total marks</b>	<b>50</b>
<b>Grade</b>	<b>5</b>	<b>Duration</b>	<b>1 HOUR</b>
		<b>Moderator</b>	<b>MRS M. FOURIE</b>

**Special instructions/  
Equipment**

1. Read instructions and questions at least twice before answering.
2. Read through answers when you have finished the paper to make sure you have provided the correct information and have not made careless errors.
3. Answer on the question paper, in the spaces provided.

This assessment has been compiled using notes and information contained in the Tom Newby School resource material. The marking memorandum has been compiled accordingly. While alternative responses will be given due acknowledgement, the official memorandum will be considered a priority document to ensure uniformity of marking.

<b>Name:</b>	<b>Surname:</b>	<b>Class:</b>
--------------	-----------------	---------------

## MEMORANDUM

### QUESTION 1 – THE SAN (Lower Select Order)

**Multiple choice. Underline the correct answer.**

- 1.1 The plant chewed by the San to reduce hunger is called \_\_\_\_\_.
- a. Cancer Bush
  - b. Geranium
  - c. Hoodia Gordonii ✓
  - d. Devil's Claw
- 1.2 A portable case used for holding arrows is called a \_\_\_\_\_.
- a. Quaver
  - b. Quiver ✓
  - c. Kaross
  - d. Hunters bag
- 1.3 The San believed that the fat of a \_\_\_\_\_ had special powers.
- a. Springbok
  - b. Gemsbok
  - c. Kudu
  - d. Eland ✓

- 1.4 The Shaman is a \_\_\_\_\_.
- a. Spiritual being
  - b. Animal
  - c. Plant
  - d. Healer ✓
- 1.5 The Linton Panel was carefully cut from rock in \_\_\_\_\_.
- a. 1925
  - b. 1932
  - c. 1917 ✓
  - d. 1900

(5)

**QUESTION 2 – TRUE OR FALSE (Lower State Order)**

**Decide whether the following statements are true or false. If it is true, then write true. If it is false, then write false and correct the statement.**

- 2.1 The KhoiKhoi were called hunter-gatherers.  
False, ✓ San/Herders ✓
- 2.2 Labola is payment of cattle to the parents of the future bride by the groom.  
True ✓
- 2.3. The San owned animals.  
False, ✓ KhoiKhoi ✓
- 2.4 The first farmers moved into Southern Africa about 2 000 years ago.  
True ✓
- 2.5 Sorghum is a type of grain which originally came from Europe.  
False, ✓ Ethiopia ✓

(8)

**QUESTION 3 – MATCHING (Lower Match Order)**

Match the letter from Column A with the correct number from Column B. Write only the correct number in the block below.

COLUMN A	COLUMN B
A. Ethnography	1. Move to follow game. Stayed in one place for a short time and moved on.
B. Buck	2. Found in the Drakensburg.
C. The Linton Panel	3. Camphor Bush.
D. Drink against Tuberculosis	4. Camelthorn tree.
E. /Kaggen	5. Famous rock art.
F. Semi-Nomadic	6. The San god; they believed he was the creator.
G. “Rosetta Stone” of South Africa	7. Learning about people by observing the way they live.
	8. Poison could take up to 12 hours to kill them.

A. 7✓	B. 8✓	C. 5✓	D. 4✓	E. 6✓	F. 1✓	G. 2✓
-------	-------	-------	-------	-------	-------	-------

(7)

**QUESTION 4 (Middle Select Order)**

Choose the correct word from the word box and fill them in the correct spaces.





Fertile	Iron	Grazing
Chronology	Bantu	Iron age
Stone	Timelines	Stone age
Furnaces	Smelting	
River banks	East Coast	

The first farmers moved into Southern Africa from West Africa. Many of the languages spoken in Southern Africa are very similar. They are the (A) **Bantu**✓ languages. The first farmers' tools were made from (B) **Iron**✓. They learnt how to turn iron ore into a liquid through a process of (C) **smelting**✓. The farmers made (D) **furnaces**✓ which was a closed structure to heat the rocks to a high temperature to turn it into a liquid. They lived in Southern Africa during the (E) **Iron Age**✓. We study the movement and lives of farmers in the order in which they happened, this is called (F) **chronology**✓. We often use (G) **timelines**✓ to study events in chronological order. The first farmers moved inland to the grasslands of the (H) **East Coast**✓ for better (I) **grazing**✓ for their cattle as well as (J) **fertile**✓ soil to grow their crops.

(10)

**QUESTION 5 (Middle Use Order)**

Use the pictures to complete the table below.

Picture	Name of plant	Name the illness that this plant cures
<p>1</p> 	<p>A</p> <p>Geranium ✓</p>	<p>B</p> <p>Cure coughs and stomach problems. ✓</p>
<p>2</p> 	<p>A</p> <p>Devil's Claw ✓</p>	<p>B</p> <p>To treat pain &amp; problems that happened in pregnancy. Used today for sore and stiff joints. ✓</p>
<p>3</p> 	<p>A</p> <p>Camphor Bush ✓</p>	<p>B</p> <p>To treat headaches &amp; blocked noses. ✓</p>
<p>4</p> 	<p>A</p> <p>Cancer Bush ✓</p>	<p>B</p> <p>Cleaning wounds and bringing down fevers. ✓</p>

**QUESTION 6 (Middle Compare Order)**

Tabulate 3 differences between the San and the KhoiKhoi.

The San	The KhoiKhoi
A. They were hunter-gatherers OR Lived in caves or rocky overhangs OR Carried possessions themselves ✓	B. They were herders OR Lived in simple tent-type huts OR Animals helped carry their possessions ✓
A. Always on the move OR Lived in Southern and South Africa ✓	B. Moved after a week or two OR Came from North of Botswana ✓
A. Moved because they were following wild animals OR Believed everything belonged to everyone ✓	B. Moved in search of grazing land for their animals OR Believed they owned their animals ✓

(6)

**QUESTION 7 (Higher Compare Order)**

7.1 Write a paragraph showing any 3 similarities between the KhoiKhoi and the first farmers.

They both ate shellfish. ✓ They both hunted for meat to eat and used the skin for clothing. ✓ They both kept livestock. ✓

(3)

7.2 a. Explain how the Mafisa system works.

This was when cattle was lent to other people for breeding purposes, but the owner could take back their cattle whenever they wanted to. ✓

b. Explain how it benefited other members.

It benefited the people who did not have cattle because now they could still have milk and they could own cattle from the breeding system. ✓

c. Which members benefited from this?

The poor people benefited ✓

(3)

**TOTAL = 50 MARKS**

**Lower Order**    -     $\left. \begin{array}{l} \text{Q1 - 5} \\ \text{Q2 - 8} \\ \text{Q3 - 7} \end{array} \right\} 20$

**Middle Order**    -     $\left. \begin{array}{l} \text{Q4 - 10} \\ \text{Q5 - 8} \\ \text{Q6 - 6} \end{array} \right\} 24$

**Higher Order**    -     $\left. \begin{array}{l} \text{Q7 - 6} \end{array} \right\} 6$