



# TOM NEWBY SCHOOL EXAMINATION



1

<b>Subject</b>	<b>HISTORY</b>	<b>Examiner</b>	<b>MRS L. MULLER</b>
<b>Date</b>	<b>3 June 2019</b>	<b>Total marks</b>	<b>50</b>
<b>Grade</b>	<b>5</b>	<b>Duration</b>	<b>1 HOUR</b>
		<b>Moderator</b>	<b>MRS M. FOURIE</b>

**Special instructions/  
Equipment**

1. Read instructions and questions at least twice before answering.
2. Read through answers when you have finished the paper to make sure you have provided the correct information and have not made careless errors.
3. Answer on the question paper, in the spaces provided.

This assessment has been compiled using notes and information contained in the Tom Newby School resource material. The marking memorandum has been compiled accordingly. While alternative responses will be given due acknowledgement, the official memorandum will be considered a priority document to ensure uniformity of marking.

<b>Name:</b>	<b>Surname:</b>	<b>Class:</b>
--------------	-----------------	---------------

This paper consists of Section A (30 marks from Question 1 to 4) and Section B (20 marks from Question 5 to 7)

**Section A: (30 marks)**

**QUESTION 1 – THE SAN**

**Multiple choice. Underline the correct answer. (5)**

- 1.1 The plant chewed by the San to reduce hunger is called \_\_\_\_\_.
- a. Cancer Bush
  - b. Geranium
  - c. Hoodia Gordonii
  - d. Devil's Claw
- 1.2 A portable case used for holding arrows is called a \_\_\_\_\_.
- a. Quaver
  - b. Quiver
  - c. Kaross
  - d. Hunters bag
- 1.3 The San believed that the fat of a \_\_\_\_\_ had special powers.
- a. Springbok
  - b. Gemsbok
  - c. Kudu
  - d. Eland

- 1.4 The Shaman is a \_\_\_\_\_.
- a. Spiritual being
  - b. Animal
  - c. Plant
  - d. Healer
- 1.5 The Linton Panel was carefully cut from rock in \_\_\_\_\_.
- a. 1925
  - b. 1932
  - c. 1917
  - d. 1900

### **QUESTION 2 – TRUE OR FALSE**

**Decide whether the following statements are true or false. If it is true, then write true. If it is false, then write false and correct the statement. (8)**

- 2.1 The KhoiKhoi were called hunter-gatherers.

---

---

- 2.2 Labola is payment of cattle to the parents of the future bride by the groom.

---

---

- 2.3. The San owned animals.

---

---

- 2.4 The first farmers moved into Southern Africa about 2 000 years ago.

---

---

- 2.5 Sorghum is a type of grain which originally came from Europe.

---

---

**QUESTION 3 – MATCH THE COLUMNS**

Match the letter from Column A with the correct number from Column B. Write only the correct number in the block below. (7)

COLUMN A	COLUMN B
A. Ethnography	1. Move to follow game. Stayed in one place for a short time and moved on.
B. Buck	2. Found in the Drakensberg.
C. The Linton Panel	3. Camphor Bush.
D. Drink against Tuberculosis	4. Camelthorn tree.
E. Kaggen	5. Famous rock art.
F. Semi-Nomadic	6. The San god; they believed he was the creator.
G. "Rosetta Stone" of South Africa	7. Learning about people by observing the way they live.
	8. Poison could take up to 12 hours to kill them.

A.	B.	C.	D.	E.	F.	G.
----	----	----	----	----	----	----

**QUESTION 4**

Choose the correct word from the word box and fill them in the correct spaces. (10)





Fertile	Iron	Grazing
Chronology	Bantu	Iron age
Stone	Timelines	Stone age
Furnaces	Smelting	
River banks	East Coast	

The first farmers moved into Southern Africa from West Africa. Many of the languages spoken in Southern Africa are very similar. They are the (A) \_\_\_\_\_ languages. The first farmers' tools were made from (B) \_\_\_\_\_. They learnt how to turn iron ore into a liquid through a process of (C) \_\_\_\_\_. The farmers made (D) \_\_\_\_\_ which was a closed structure to heat the rocks to a high temperature to turn it into a liquid. They lived in Southern Africa during the (E) \_\_\_\_\_. We study the movement and lives of farmers in the order in which they happened, this is called (F) \_\_\_\_\_. We often use (G) \_\_\_\_\_ to study events in chronological order. The first farmers moved inland to the grasslands of the (H) \_\_\_\_\_ for better (I) \_\_\_\_\_ for their cattle as well as (J) \_\_\_\_\_ soil to grow their crops.

**Section B: (20 marks)**

**QUESTION 5**

Use the pictures to complete the table below. (8)

Picture	Name of plant	Name the illness that this plant cures
<p>1</p> 	<p>A</p>	<p>B</p>
<p>2</p> 	<p>A</p>	<p>B</p>
<p>3</p> 	<p>A</p>	<p>B</p>
<p>4</p> 	<p>A</p>	<p>B</p>

**QUESTION 6**

**Tabulate 3 differences between the San and the KhoiKhoi. (6)**

The San	The KhoiKhoi
A.	B.
A.	B.
A.	B.

**QUESTION 7**

7.1 Write a paragraph showing any 3 similarities between the KhoiKhoi and the first farmers. **(3)**

---



---



---



---



---



---

7.2 a. Explain how the Mafisa system works. **(1)**

---

b. Explain how it benefited other members. **(1)**

---



---

c. Which members benefited from this? **(1)**

---



---

**GRAND TOTAL = 50 MARKS**

