



TOM NEWBY SCHOOL EXAMINATION

MEMO

Subject	GEOGRAPHY	Examiner	MRS P SINGH
Date	NOVEMBER 2018	Total marks	50
Session	1	Duration	1 HOUR
Grade	6	Moderator	MRS PIENAAR
Special instructions/ Equipment	<p>1. Read instructions and questions at least twice before answering.</p> <p>2. Read through answers when you have finished the paper to make sure you have provided the correct information and have not made careless errors.</p> <p>3. Answer on the question paper, in the spaces provided.</p>		
<p>This assessment has been compiled using notes and information contained in the Tom Newby School resource material. The marking memorandum has been compiled accordingly. While alternative responses will be given due acknowledgement, the official memorandum will be considered a priority document to ensure uniformity of marking.</p>			

Name:	Surname:	Class:
--------------	-----------------	---------------

QUESTION 1: Lower – Label. Vegetation of a Rainforest

Label a, b and c on the diagram below.

- a. **Emergent Layer**
- b. **Canopy Layer**
- c. **Understory Layer**

[3]

QUESTION 2: Lower State – Climates of the World.

State whether the following statements are true or false. If false, correct the statement.

- 1.1 The hottest places are found next to the ocean.
False, along the equator.
- 1.2 The height above sea level also affects temperature.
True.
- 1.3 The coldest parts of the world are at the Northern and Southern Hemispheres.
False, north and south poles.
- 1.4 The higher up one goes, the warmer it gets.
False, colder.
- 1.5 Places near the sea have a humid climate.
False, moderate.

[7]

QUESTION 3: Lower – Select. Tropical Rainforests

Multiple Choice: Underline the correct answer.

2.1 Tropical rainforests are forests that are:

- a. cold and dry
- b. warm and wet
- c. humid and wet
- d. warm and dry

2.2 Rainforests absorb _____ tons of carbon dioxide every year.

- a. 6.8 million
- b. 4.8 billion
- c. 4.8 million
- d. 6.8 billion

2.3 Trees are important because:

- a. They turn oxygen into carbon dioxide
- b. They turn oxygen into nitrogen
- c. They turn carbon dioxide into oxygen
- d. They turn carbon dioxide into nitrogen

2.4 What is the name of one of the most well-known rainforests.

- a. The Brazilian rainforest
- b. The Amazon forest
- c. The Ivory Coast rainforest
- d. The Jewel of the Earth

2.5 What is the change in the world's climate linked to?

- a. CFC's
- b. The ozone layer
- c. The atmosphere
- d. Global warming




QUESTION 4: Middle Order (Match). The Bedouins


Match the word in Column A with the meaning or phrase in Column B. Write down only the letter.

4.1 f 4.2 g 4.3 h 4.4 j 4.5 b
 4.6 d 4.7 i 4.8 a 4.9 c 4.10 e
 (10)

QUESTION 5: Middle order – Use. Location of Settlements

Study the pictures below. Now complete the answers for the missing spaces. In block one you need to state the type of town that has been established. Block two you need to give a reason why the town was established and in block three you need to provide a suitable example for the settlement.

	Picture	1. Type of Town	2. Reason	3. Example
5.1		a. Mining Town	b. Minerals are found in the area.	Johannesburg and c. Kimberley
5.2		a. Fishing Town	b. Lots of fish available and people can make a living out of it.	c. Gansbaai and Lambert's Bay.
5.3		a. Industrial Town	Resources are close by.	b. Sasolburg

5.4		Harbour Town	a. The bays are safe to build harbours.	b. Port Elizabeth
-----	---	--------------	---	-------------------

(10)

QUESTION 6: Middle Order (Compare). Rural and Urban Areas

6.1 Compare the rural areas to urban areas by providing two differences.

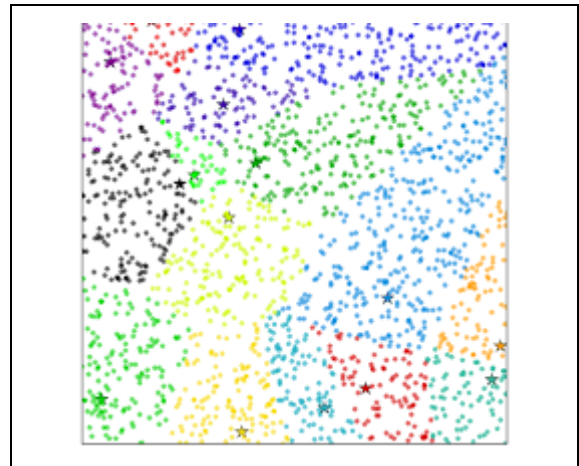
Rural Areas	Urban Areas
1. Places in the country.	1. Places near the city.
2. Sparsely populated.	2. Densely populated.
3. Calm	3. Noisy, overcrowded. (Various)

(4)

6.2 Population distribution is the way people are spread over an area. Use dots to show these distributions. [Middle order (draw)].



Sparsely populated area



Densely populated area

(1)

QUESTION 7: Higher order (Summarise)

- 7.1 In about five sentences, summarise how the City of Johannesburg has grown and developed as an urban settlement. (1 mark for each sentence) (5)
- In the 1880's gold was discovered in the area that was to become Johannesburg. As a result, thousands of people flocked to this area and settled there, hoping to get rich.
 - More and more houses were built and because people needed basic things like food and clothing, shops started selling these goods.
 - In time, services such as water and electricity were provided. Roads, railway lines and stations were also built.
 - Banks and other offices were opened and hospitals and schools were built.
 - People also needed entertainment and so restaurants, theatres and cinemas were built.
- 7.2 Why do you think most people do not want to live in sparsely populated provinces? [Higher – Evaluate] (1)
Lack of jobs, schools, hospitals etc (Any 1)
- 7.3 You live in the city. In your opinion what are some of the negative effects of living in the city? Write two good sentences to explain this. [Higher – Evaluate and Support] (2)
- a. Air pollution due to cars and factory smoke.
 - b. Noise levels are high because too many people live here and they are always busy.
- 7.4
- a. What is the name of the area you live in?
 - b. Why do you think your parents chose to live in this area?
- [Higher – Evaluate] (2)
- a. Benoni.
 - b. It is close to schools, hospitals and doctors in the area.

TOTAL: 50 MARKS