



TOM NEWBY SCHOOL EXAMINATION

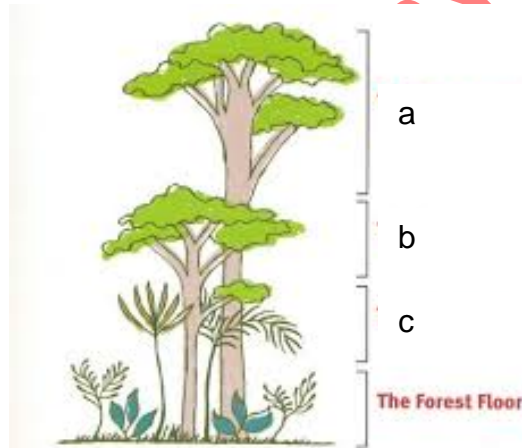


Subject	GEOGRAPHY	Examiner	MRS P SINGH
Date	20 NOVEMBER 2018	Total marks	50
Session	1	Duration	1 HOUR
Grade	6	Moderator	MRS PIENAAR
Special instructions/ Equipment	1. Read instructions and questions at least twice before answering. 2. Read through answers when you have finished the paper to make sure you have provided the correct information and have not made careless errors. 3. Answer on the question paper, in the spaces provided.		
This assessment has been compiled using notes and information contained in the Tom Newby School resource material. The marking memorandum has been compiled accordingly. While alternative responses will be given due acknowledgement, the official memorandum will be considered a priority document to ensure uniformity of marking.			

Name:	Surname:	Class:
--------------	-----------------	---------------

QUESTION 1: Vegetation of a Rainforest

Label a, b and c on the diagram below.



- a. _____
- b. _____
- c. _____

[3]

QUESTION 2: Climates of the World.

State whether the following statements are true or false. If false, correct the statement.

1.1 The hottest places are found next to the ocean.

1.2 The height above sea level also affects temperature.

1.3 The coldest parts of the world are at the Northern and Southern Hemispheres.

1.4 The higher up one goes, the warmer it gets.

1.5 Places near the sea have a humid climate.

[7]

QUESTION 3: Tropical Rainforests

Multiple Choice: Underline the correct answer.

2.1 Tropical rainforests are forests that are:

- a. cold and dry
- b. warm and wet
- c. humid and wet
- d. warm and dry

2.2 Rainforests absorb _____ tons of carbon dioxide every year.

- a. 6.8 million
- b. 4.8 billion
- c. 4.8 million
- d. 6.8 billion

2.3 Trees are important because:

- a. They turn oxygen into carbon dioxide
- b. They turn oxygen into nitrogen
- c. They turn carbon dioxide into oxygen
- d. They turn carbon dioxide into nitrogen



2.4 What is the name of one of the most well-known rainforests?

- a. The Brazilian rainforest
- b. The Amazon forest
- c. The Ivory Coast rainforest
- d. The Jewel of the Earth

2.5 What is the change in the world's climate linked to?

- a. CFCs
- b. The ozone layer
- c. The atmosphere
- d. Global warming

[5]

QUESTION 4: The Bedouins

Match the word in Column A with the meaning or phrase in Column B. Write down only the letter.





<u>COLUMN A</u>	<u>COLUMN B</u>
4.1 Camels	a. People who move from one area to another.
4.2 Arabic	b. Is a famous trading town, in the Sahara Desert.
4.3 Cairo	c. People of the Australian desert.
4.4 Tents	d. Live by hunting and gathering.
4.5 Timbuktu	e. A water source in the desert.
4.6 Khoisan	f. Used to carry belongings across the desert.
4.7 Bedouins	g. A language spoken by people who live in the Sahara Desert.
4.8. Nomads	h. Found on the Nile River.
4.9 Aborigines	i. They transported salt, spices, gold and ivory through the desert.
4.10. Oasis	j. Provide shade and coolness in the desert.

4.1 _____ 4.2 _____ 4.3 _____ 4.4 _____ 4.5 _____
 4.6 _____ 4.7 _____ 4.8 _____ 4.9 _____ 4.10 _____

(10)

QUESTION 5: Location of Settlements

Study the pictures below. Fill the answers into the missing spaces. In Column 1, you need to state the type of town that has been established. In Column 2 you need to give a reason why the town was established. In Column 3 you need to provide a suitable example for the settlement.

	Picture	Column 1 Type of Town	Column 2 Reason	Column 3 Example
5.1				Johannesburg and
5.2				and Lambert's Bay.
5.3				
5.4				

QUESTION 6: Rural and Urban Areas

6.1 Complete the table to show two differences between rural and urban areas.


Rural Areas	Urban Areas
1.	1.
2.	2.

(4)

6.2 Population distribution is the way people are spread over an area. Use dots to show these distributions.



Sparsely populated area



Densely populated area

(1)

QUESTION 7:

7.1 In about five sentences, summarise how the City of Johannesburg has grown and developed as an urban settlement. (5)

7.2 Explain why most people do not want to live in sparsely populated provinces? (1)

7.3 In your opinion, what are the two worst things about living in a city? (2)

a. _____

b. _____

7.4 In which area/suburb do you live? Why do you think your parents chose to live in this area? (2)

TOTAL: 50 MARKS

DRAFT - TOM NEWBY SCHOOL