



TOM NEWBY SCHOOL EXAMINATION



Subject	History	Examiner	Mrs P Singh
Date	9 June 2016	Total marks	50
Session	2	Duration	1 hour
Grade	6	Moderator	Mrs W Pienaar
Special instructions/ Equipment	<ol style="list-style-type: none"> 1. Read instructions and questions at least twice before answering. 2. Read through your answers when you have finished the paper to make sure you have provided the correct information and have not made careless errors. 3. Answer on the question paper, in the spaces provided. 		

This Exam has been compiled using notes and information contained in the Tom Newby School book. The marking memorandum has been compiled accordingly. While alternative responses will be given due acknowledgement, the official memorandum will be considered a priority document to ensure uniformity of marking. Up to 10% of the total mark allocation may be deducted for spelling and grammatical errors, except in the case of Language papers, where deductions are made according to a memorandum. Time allocation on this examination includes provision for concession.

Name and Surname: _____

Grade: _____

Question 1 – Mapungubwe (3)

Complete the paragraph by filling in the missing words.

The city of Mapungubwe is in the (a) _____ Province, on a farm called (b) _____ near the (c) _____ River. Mapungubwe means (d) _____. The people of Mapungubwe were wealthy. They farmed with cattle, (e) _____ and (f) _____ between 900CE and 1150CE.

Question 2 – Mapungubwe: Mining and Leaders (5)

Decide whether each of the following statements is true or false.

If it is true then write *True*.

If it is false, write *False* and write the statement correctly.

2.1 Miners used fire and water to make the rocks weak.

2.2 The miners made a fire in front of the rock face and then poured cold water onto the hot rock to make it burst into flames.


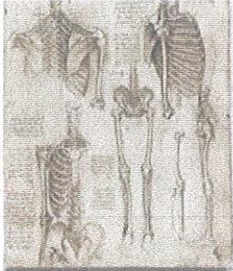

2.3 The symbols of authority of the King were the elephant and the hippopotamus.



2.4 In 1220 AD the King decided to move his base to the top of the hill.

2.5 The ruling class in Mapungubwe was led by a President.

Question 3 (10)

Name the invention or work of art shown in each picture and give the name of the inventor or artist.

Picture	Name of invention or work of art	Inventor or Artist's name
3.1 		
3.2 		
3.3 		

Picture	Name of invention or work of art	Inventor or Artist's name
3.4 		
3.5 		

Question 4 (10 x ½ = 5)

Match the information in Column A with the information in Column B. Write the letter of the answer you have chosen in the spaces provided after the table. Write only the letter, e.g. 1. **a**

Column A		Column B
4.1	The century after Marco Polo's travels became known as...	a. Voyages of Exploration.
4.2	This ruler of China gave Marco Polo a golden tablet.	b. Conservative Era
4.3	This explorer was inspired by Marco Polo.	c. Spice
4.4	Christopher Columbus reached this island.	d. Galileo Galilei
4.5	Attempts to explore the world are known as ...	e. Merchant
4.6	The European Renaissance was at a turning point at this time.	f. Age of Discovery
4.7	The Mona Lisa and The Last Supper were painted by this artist.	g. Johannes Gutenberg
4.8	The speed at which different objects fall and work around pendulums was discovered by this scientist.	h. Christopher Columbus
4.9	Another word for a trader is...	i. Kublai Khan
4.10	A valuable product from The East is...	j. Leonardo da Vinci
		k. The Caribbean

4.1 _____ 4.2 _____ 4.3 _____ 4.4 _____ 4.5 _____
4.6 _____ 4.7 _____ 4.8 _____ 4.9 _____ 4.10 _____

Question 5 (5 x 1 = 5)

Answer the following questions about Bartholomew Dias:

- 5.1 In what year did Dias set sail? _____
- 5.2 Today, the place in Namibia where Dias landed first is called _____
- 5.3 What type of wind blew Dias' ship off course? _____
- 5.4 How long was Dias at sea before he returned to his home? _____
- 5.5 How did Dias die? _____
- _____
- _____

Question 6 (3 x 1 = 3)

Give a good definition for each of the following:

- 6.1 Scurvy

- _____
- 6.2 Missionary

- _____
- 6.3 Astronomy

- _____
- _____

Question 7

Answer the following questions about Vasco Da Gama:

- 7.1 Why did Vasco Da Gama set out to find a trade route to India? (1)

- _____
- 7.2 Why did Vasco Da Gama have serious issues when he tried to trade at Calicut? Name 2. (2)
- a) _____
- _____

- b) _____
- 7.3 Describe two serious problems that occurred during Da Gama's (2)
second voyage.
- a) _____

- b) _____

Question 8

Answer the following questions about The V.O.C.:

- 8.1 What is the English name for the V.O.C.? (1)

- 8.2 Give two reasons why Jan van Riebeeck was sent to The Cape. (2)
- a) _____

- b) _____

- 8.3 In the space below, draw up a table with 2 columns. Use the table (8)
to list 3 ways that sailors misbehaved on V.O.C. ships and
describe the type of punishment that was normally used for that
misbehaviour. Provide a suitable heading for each column.
Mark allocation: Table (1) Heading (2 x ½ = 1) Info (6 x 1)

--	--

8.4 Life on board the V.O.C. ships could be very unpleasant. Describe (3) 3 things that could have made the sailors' lives difficult.

- a) _____

- b) _____

- c) _____

WELL DONE. YOU'VE COMPLETED THE EXAM.

NOW...

